

SOLVED EXAMPLES

Ex. 1. Find the momentum of a 12.0 MeV photon.

Sol. $p = \frac{E}{c} = 12 \text{ MeV}/c.$

Ex. 2. Monochromatic light of wavelength 3000 Å is incident normally on a surface of area 4 cm². If the intensity of the light is $15 \times 10^{-2} \text{ W/m}^2$, determine the rate at which photons strike the surface.

Sol. Rate at which photons strike the surface

$$= \frac{IA}{hc/\lambda} = \frac{6 \times 10^{-5} \text{ J/s}}{6.63 \times 10^{-19} \text{ J/photon}} = 9.05 \times 10^{13} \text{ photon/s.}$$

Ex. 3. The kinetic energies of photoelectrons range from zero to $4.0 \times 10^{-19} \text{ J}$ when light of wavelength 3000 Å falls on a surface. What is the stopping potential for this light ?

Sol. $K_{\text{max}} = 4.0 \times 10^{-19} \text{ J} \times \frac{1 \text{ eV}}{1.6 \times 10^{-19} \text{ J}} = 2.5 \text{ eV.}$

Then, from $eV_s = K_{\text{max}}$, $V_s = 2.5 \text{ V.}$

Ex. 4. What is the threshold wavelength for the material in above Ex. ?

Sol. $2.5 \text{ eV} = \frac{12.4 \times 10^3 \text{ eV} \cdot \text{Å}}{3000 \text{ Å}} - \frac{12.4 \times 10^3 \text{ eV} \cdot \text{Å}}{\lambda_{\text{th}}}$

Solving, $\lambda_{\text{th}} = 7590 \text{ Å.}$

Ex. 5. Find the de Broglie wavelength of a 0.01 kg pellet having a velocity of 10 m/s.

Sol. $\lambda = h/p = \frac{6.63 \times 10^{-34} \text{ J.s}}{0.01 \text{ kg} \times 10 \text{ m/s}} = 6.63 \times 10^{-23} \text{ Å.}$

Ex. 6. Determine the accelerating potential necessary to give an electron a de Broglie wavelength of 1 Å, which is the size of the interatomic spacing of atoms in a crystal.

Sol. $V = \frac{h^2}{2m_0 e \lambda^2} = 151 \text{ V.}$

Ex. 7. Determine the wavelength of the second line of the Paschen series for hydrogen.

Sol. $\frac{1}{\lambda} = (1.097 \times 10^{-3} \text{ Å}^{-1}) \left(\frac{1}{3^2} - \frac{1}{5^2} \right)$ or $\lambda = 12,820 \text{ Å.}$

Ex. 8. How many different photons can be emitted by hydrogen atoms that undergo transitions to the ground state from the $n = 5$ state ?

Sol. No of possible transition from $n = 5$ are ${}^5C_2 = 10$

Ans. 10 photons.

Ex. 9. An electron rotates in a circle around a nucleus with positive charge Ze . How is the electrons' velocity related to the radius of its orbit ?

Sol. The force on the electron due to the nuclear provides the required centripetal force

$$\frac{1}{4\pi\epsilon_0} \frac{Ze \cdot e}{r^2} = \frac{mv^2}{r} \quad \Rightarrow \quad v = \sqrt{\frac{Ze^2}{4\pi\epsilon_0 \cdot rm}} \quad \text{Ans.} \quad v = \sqrt{\frac{Ze^2}{4\pi\epsilon_0 \cdot rm}}$$

PHYSICS FOR JEE MAINS & ADVANCED

- Ex. 10.** (i) Calculate the first three energy levels for positronium.
 (ii) Find the wavelength of the H_α line ($3 \rightarrow 2$ transition) of positronium.
Sol. In positronium electron and positron revolve around their centre of mass

$$\frac{1}{4\pi\epsilon_0} \frac{e^2}{r^2} = \frac{mv^2}{r/2} \quad \dots\dots\dots(1)$$

$$\frac{nh}{2\pi} = 2 \times mv_{k/2} \quad \dots\dots\dots(2)$$

From (1) & (2)

$$V = \frac{1}{2} \cdot \frac{1}{4\pi\epsilon_0} \cdot \frac{e^2}{nh} \times 2p = \frac{e^2}{4\epsilon_0 nh}$$

$$TE = -\frac{1}{2}mv^2 \times 2 = -m \cdot \frac{e^4}{16\epsilon_0^2 n^2 h^2}$$

$$= -6.8 \frac{1}{n^2} \text{ eV}$$

(i) $E_1 = -6.8 \text{ eV}$

$$E_2 = -6.8 \times \frac{1}{2^2} \text{ eV} = -1.70 \text{ eV}$$

$$E_3 = -6.8 \times \frac{1}{3^2} \text{ eV} = -0.76 \text{ eV}$$

(ii) $\Delta E (3 \rightarrow 2) = E_3 - E_2 = -0.76 - (-1.70) \text{ eV}$
 $= 0.94 \text{ eV}$

The corresponding wave length

$$\lambda = \frac{1.24 \times 10^4}{0.94} \text{ \AA} = 1313 \text{ \AA}$$

Ans. (i) $-6.8 \text{ eV}, -1.7 \text{ eV}, -0.76 \text{ eV}$; (ii) 1313 \AA .

- Ex. 11.** A H-atom in ground state is moving with initial kinetic energy K. It collides head on with a He^+ ion in ground state kept at rest but free to move. Find minimum value of K so that both the particles can excite to their first excited state.

Sol. Energy available for excitation = $\frac{4K}{5}$

Total energy required for excitation
 $= 10.2 \text{ eV} + 40.8 \text{ eV}$
 $= 51.0 \text{ eV}$

$\therefore \frac{4k}{5} = 51 \Rightarrow k = 63.75 \text{ eV}$

- Ex. 12.** A TV tube operates with a 20 kV accelerating potential. What are the maximum-energy X-rays from the TV set?

Sol. The electrons in the TV tube have an energy of 20 keV, and if these electrons are brought to rest by a collision in which one X-ray photon is emitted, the photon energy is 20 keV.

- Ex. 13.** In the Moseley relation, $\sqrt{\nu} = a(Z - b)$ which will have the greater value for the constant a for K_α or K_β transition?

Sol. A is larger for the K_β transitions than for the K_α transitions.

Exercise # 1

[Single Correct Choice Type Questions]

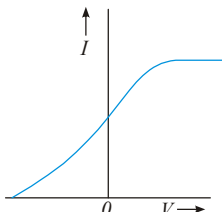
- If the frequency of light in a photoelectric experiment is doubled then maximum kinetic energy of photoelectron

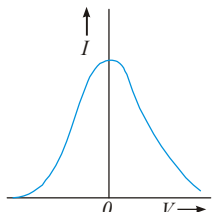
(A) be doubled (B) be halved
(C) become more than double (D) become less than double
- In a photoelectric experiment, if stopping potential is applied, then photocurrent becomes zero. This means that :

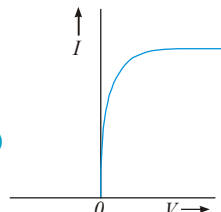
(A) the emission of photoelectrons is stopped
(B) the photoelectrons are emitted but are reabsorbed by the emitter metal
(C) the photoelectrons are accumulated near the collector plate
(D) the photoelectrons are dispersed from the sides of the apparatus.
- Two separate monochromatic light beams A and B of the same intensity (energy per unit area per unit time) are falling normally on a unit area of a metallic surface. Their wavelength are λ_A and λ_B respectively. Assuming that all the incident light is used in ejecting the photoelectrons, the ratio of the number of photoelectrons from beam A to that from B is

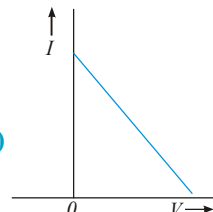
(A) $\left(\frac{\lambda_A}{\lambda_B}\right)$ (B) $\left(\frac{\lambda_B}{\lambda_A}\right)$ (C) $\left(\frac{\lambda_A}{\lambda_B}\right)^2$ (D) $\left(\frac{\lambda_B}{\lambda_A}\right)^2$
- When a centimetre thick surface is illuminated with light of wavelength λ , the stopping potential is V . When the same surface is illuminated by light of wavelength 2λ , the stopping potential is $V/3$. The threshold wavelength for the surface is :

(A) $\frac{4\lambda}{3}$ (B) 4λ (C) 6λ (D) $\frac{8\lambda}{3}$
- Which one of the following graphs in figure shows the variation of photoelectric current (I) with voltage (V) between the electrodes in a photoelectric cell ?

(A) 

(B) 

(C) 

(D) 
- A photon of light enters a block of glass after travelling through vacuum. The energy of the photon on entering the glass block

(A) increases because its associated wavelength decreases
(B) Decreases because the speed of the radiation decreases
(C) Stays the same because the speed of the radiation and the associated wavelength do not change
(D) Stays the same because the frequency of the radiation does not change
- The maximum kinetic energy of photoelectrons emitted from a surface when photons of energy 6 eV fall on it is 4 eV. The stopping potential is :

(A) 2V (B) 4V (C) 6V (D) 10V
- The anode plate in an experiment on photoelectric effect is kept vertically above the cathode plate. Light source is put on and a saturation photocurrent is recorded. An electric field is switched on which has vertically downward direction

(A) The photocurrent will increase (B) The kinetic energy of the electrons will increase
(C) The stopping potential will decrease (D) The threshold wavelength will increase

PHYSICS FOR JEE MAINS & ADVANCED

9. The energy of a photon of frequency ν is $E = h\nu$ and the momentum of a photon of wavelength λ is $p = h/\lambda$. From this statement one may conclude that the wave velocity of light is equal to :
- (A) $3 \times 10^8 \text{ ms}^{-1}$ (B) $\frac{E}{p}$ (C) $E p$ (D) $\left(\frac{E}{p}\right)^2$
10. Let p and E denote the linear momentum and the energy of a photon. For another photon of smaller wavelength (in same medium)
- (A) both p and E increase (B) p increases and E decreases
 (C) p decreases and E increases (D) both p and E decreases
11. The de Broglie wavelength of an electron moving with a velocity $1.5 \times 10^8 \text{ ms}^{-1}$ is equal to that of a photon. The ratio of the kinetic energy of the electron to that of the energy of photon is :
- (A) 2 (B) 4 (C) $\frac{1}{2}$ (D) $\frac{1}{4}$
12. A particle of mass M at rest decays into two particles of masses m_1 and m_2 , having non zero velocities. The ratio of the de Broglie wavelengths of the particles, λ_1/λ_2 is :
- (A) $\frac{m_1}{m_2}$ (B) $\frac{m_2}{m_1}$ (C) 1 : 1 (D) $\sqrt{\frac{m_2}{m_1}}$
13. The wavelength λ of de Broglie waves associated with an electron (mass m , charge e) accelerated through a potential difference of V is given by (h is Planck's constant) :
- (A) $\lambda = h/mV$ (B) $\lambda = h/2 \text{ meV}$ (C) $\lambda = h/\sqrt{meV}$ (D) $\lambda = h/\sqrt{2meV}$
14. The de Broglie wavelength of a neutron corresponding to root mean square speed at 927°C is λ . What will be the de Broglie wavelength of the neutron corresponding to root mean square speed at 27°C ?
- (A) $\frac{\lambda}{2}$ (B) λ (C) 2λ (D) 4λ
15. Consider 2 hydrogen like ions A and B. Ionization energy of A is greater than that of B. Let r , u , E and L represent the radius of the orbit, speed of the electron, energy of the atom and orbital angular momentum of the electron respectively. In ground state:
- (A) $r_A > r_B$ (B) $u_A > u_B$ (C) $E_A > E_B$ (D) $L_A > L_B$
16. If a_0 is the Bohr radius, the radius of the $n = 2$ electronic orbit in triply ionized beryllium is -
- (A) $4a_0$ (B) a_0 (C) $a_0/4$ (D) $a_0/16$
17. Which energy state of doubly ionized lithium (Li^{++}) has the same energy as that of the ground state of hydrogen ? Given Z for lithium = 3 :
- (A) $n = 1$ (B) $n = 2$ (C) $n = 3$ (D) $n = 4$
18. If an orbital electron of the hydrogen atom jumps from the ground state to a higher energy state, its orbital speed reduces to half its initial value. If the radius of the electron orbit in the ground state is r , then the radius of the new orbit would be :
- (A) $2r$ (B) $4r$ (C) $8r$ (D) $16r$
19. In Bohr's model of hydrogen atom, the centripetal force is provided by the Coulomb attraction between the proton and the electron. If a_0 is the radius of the ground state orbit, m is the mass and e the charge of an electron and ϵ_0 is the vacuum permittivity, the speed of the electron is :
- (A) zero (B) $\frac{e}{\sqrt{\epsilon_0 a_0 m}}$ (C) $\frac{e}{\sqrt{4\pi\epsilon_0 a_0 m}}$ (D) $\frac{\sqrt{4\pi\epsilon_0 a_0 m}}{e}$

20. Three photons coming from emission spectra of hydrogen sample are picked up. Their energies are 12.1 eV, 10.2 eV and 1.9 eV. These photons must come from
 (A) a single atom (B) two atoms
 (C) three atoms (D) either two atoms or three atoms
21. In the Bohr model of the hydrogen atom, the ratio of the kinetic energy to the total energy of the electron in a quantum state n is :
 (A) -1 (B) $+1$ (C) $\frac{1}{n}$ (D) $\frac{1}{n^2}$
22. The ionization energy of hydrogen atom is 13.6 eV. Hydrogen atoms in the ground state are excited by electromagnetic radiation of energy 12.1 eV. How many spectral lines will be emitted by the hydrogen atoms?
 (A) one (B) two (C) three (D) four
23. In a hypothetical atom, if transition from $n = 4$ to $n = 3$ produces visible light then the possible transition to obtain infrared radiation is :
 (A) $n = 5$ to $n = 3$ (B) $n = 4$ to $n = 2$ (C) $n = 3$ to $n = 1$ (D) none of these
24. The wavelength of the first line in Balmer series in the hydrogen spectrum is λ . What is the wavelength of the second line :
 (A) $\frac{20\lambda}{27}$ (B) $\frac{3\lambda}{16}$ (C) $\frac{5\lambda}{36}$ (D) $\frac{3\lambda}{4}$
25. Energy levels A , B and C of a certain atom correspond to increasing values of energy, i.e. $E_A < E_B < E_C$. If λ_1 , λ_2 and λ_3 are the wavelengths of radiations corresponding to transitions C to B , B to A and C to A respectively, which of the following relations is correct ?
 (A) $\lambda_3 = \lambda_1 + \lambda_2$ (B) $\lambda_3 = \frac{\lambda_1 \lambda_2}{\lambda_1 + \lambda_2}$ (C) $\lambda_1 + \lambda_2 + \lambda_3 = 0$ (D) $\lambda_3^2 = \lambda_1^2 + \lambda_2^2$
26. The frequency of the first line in Lyman series in the hydrogen spectrum is ν . What is the frequency of the corresponding line in the spectrum of doubly ionized Lithium ?
 (A) ν (B) 3ν (C) 9ν (D) 27ν
27. Consider a photon of continuous X-ray coming from a Coolidge tube. Energy of photon comes from
 (A) the kinetic energy of the striking electron (B) the kinetic energy of the free electrons of the target
 (C) the kinetic energy of the ions of the target (D) an atomic transition in the target
28. An electron with kinetic energy 10 eV is incident on a hydrogen atom in its ground state. The collision
 (A) must be elastic (B) may be partially elastic
 (C) must be completely inelastic (D) may be completely inelastic
29. The characteristic X-ray spectrum is emitted due to transition of
 (A) valence electrons of the atom (B) inner electrons of the atom
 (C) nucleus of the atom (D) both, the inner electrons and the nucleus of the atom
30. If the voltage across the filament is increased, the cutoff wavelength
 (i) will increase (ii) will decrease (iii) will remain unchanged (iv) will change
 (A) increasing the potential difference between the anode and filament
 (B) increasing the filament current
 (C) decreasing the filament current
 (D) decreasing the potential difference between the anode and filament

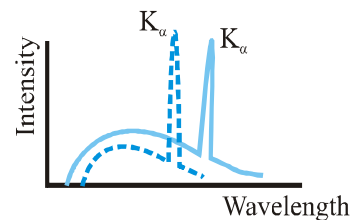
PHYSICS FOR JEE MAINS & ADVANCED

31. In the Davisson and Germer experiment, the velocity of electrons emitted from the electron gun can be increased by :
- (A) increasing the potential difference between the anode and filament
 (B) increasing the filament current
 (C) decreasing the filament current
 (D) decreasing the potential difference between the anode and filament
32. When ultraviolet light is incident on a photocell, its stopping potential is V_0 and the maximum kinetic energy of the photoelectrons is K_{\max} . When X-rays are incident on the same cell, then :
- (A) V_0 and K_{\max} both increase
 (B) V_0 and K_{\max} both decrease
 (C) V_0 increases but K_{\max} remains the same
 (D) K_{\max} increases but V_0 remains the same

33. In Davisson-Germer experiment, the filament emits
- (A) Photons (B) Protons (C) X-rays (D) Electrons

34. The relation between λ_1 : wavelength of series limit of Lyman series, λ_2 : the wavelength of the series limit of Balmer series & λ_3 : the wavelength of first line of Lyman series is :
- (A) $\lambda_1 = \lambda_2 + \lambda_3$ (B) $\lambda_3 = \lambda_1 + \lambda_2$ (C) $\lambda_2 = \lambda_3 - \lambda_1$ (D) none of these

35. Given curve shows the intensity-wavelength relations of X-rays coming from two different Coolidge tubes A and B. The dark curve represents the relation for the tube A in which the potential difference between the target and the filament is V_A and the atomic number of the target material is Z_A . Similarly dotted curve is for tube B. These quantities are V_B and Z_B for the tube B. Then,



- (A) $V_A > V_B, Z_A > Z_B$ (B) $V_A > V_B, Z_A < Z_B$
 (C) $V_A < V_B, Z_A > Z_B$ (D) $V_A < V_B, Z_A < Z_B$

36. According to Moseley's law the ratio of the slopes of graph between \sqrt{v} and Z for K_β and K_α is :

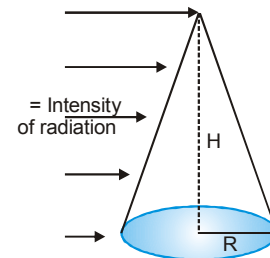
- (A) $\sqrt{\frac{32}{27}}$ (B) $\sqrt{\frac{27}{32}}$ (C) $\sqrt{\frac{33}{22}}$ (D) $\sqrt{\frac{22}{33}}$

37. If λ_{\min} is minimum wavelength produced in X-ray tube and λ_{k_α} is the wavelength of k_α line. As the operating tube voltage is increased.

- (A) $(\lambda_k - \lambda_{\min})$ increases (B) $(\lambda_k - \lambda_{\min})$ decreases (C) λ_{k_α} increases (D) λ_{k_α} decreases

38. The radiation force experienced by body exposed to radiation of intensity I , assuming surface of body to be perfectly absorbing is :

- (A) $\frac{\pi R^2 I}{c}$ (B) $\frac{\pi R H I}{c}$
 (C) $\frac{I R H}{2c}$ (D) $\frac{I R H}{c}$



39. If the frequency of K_α X-ray emitted from element with atomic number 31 is f , then the frequency of K_α X-ray emitted from the element with atomic number 51 would be (assume that screening constant for K_α is 1):

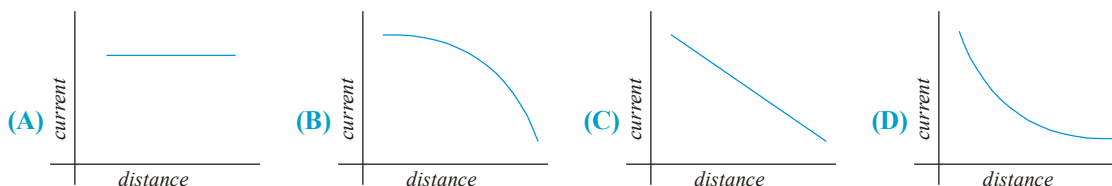
- (A) $\frac{5}{3} f$ (B) $\frac{51}{31} f$ (C) $\frac{9}{25} f$ (D) $\frac{25}{9} f$

40. Radiation pressure on any surface (for a given intensity):
 (A) is dependent on wavelength of the light used
 (B) is dependent on nature of surface and intensity of light used
 (C) is dependent on frequency and nature of surface
 (D) depends on the nature of source from which light is coming and on nature of surface on which it is falling.
41. In a discharge tube when 200 volt potential difference is applied 6.25×10^{18} electrons move from cathode to anode and 3.125×10^{18} singly charged positive ions move from anode to cathode in one second. Then the power of tube is:
 (A) 100 watt (B) 200 watt (C) 300 watt (D) 400 watt
42. An atom consists of three energy levels given by a ground state with energy $E_0 = 0$, the first excited state with energy $E_1 = K$ and the second excited state with energy $E_2 = 2K$ where $K > 0$. The atom is initially in the ground state. Light from a laser which emits photons with energy $1.5K$ is shined on the atom. Which of the following is/are correct ?
 (A) The photons are absorbed, putting one atom in a state E_1 and one atom in a state E_2 .
 (B) A photon will always be absorbed, but half the time the atom will go into the state with energy K and the other half into the state with energy $2K$. In this way, energy will be conserved on the average.
 (C) The atom absorbs a photon, goes into the first excited state with energy K and emits a photon with energy $0.5 K$ to conserve energy.
 (D) The atom does not absorb any photon and stays in the ground state.
43. The wavelengths of K_α x-rays of two metals 'A' and 'B' are $\frac{4}{1875 R}$ and $\frac{1}{675 R}$ respectively, where 'R' is rydberg constant. The number of elements lying between 'A' and 'B' according to their atomic numbers is
 (A) 3 (B) 6 (C) 5 (D) 4
44. An image of the sun is formed by a lens of focal length 30 cm on the metal surface of a photo-electric cell and it produces a current I . The lens forming the image is then replaced by another lens of the same diameter but of focal length 15 cm. The photoelectric current in this case will be : (In both cases the plate is kept at focal plane and normal to the axis lens). (Assume saturation current only).
 (A) $I/2$ (B) $2I$ (C) I (D) $4I$
45. The work function of a certain metal is $\frac{hC}{\lambda_0}$. When a monochromatic light of wavelength $\lambda < \lambda_0$ is incident such that the plate gains a total power P . If the efficiency of photoelectric emission is $\eta\%$ and all the emitted photoelectrons are captured by a hollow conducting sphere of radius R already charged to potential V , then neglecting any interaction between plate and the sphere, expression of potential of the sphere at time t is :
 (A) $V + \frac{100\eta \lambda P e t}{4\pi\epsilon_0 R h C}$ (B) $V - \frac{\eta \lambda P e t}{400\pi\epsilon_0 R h C}$ (C) V (D) $\frac{\lambda P e t}{4\pi\epsilon_0 R h C}$
46. Which one of the following statements is NOT true for de Broglie waves ?
 (A) All atomic particles in motion have waves of a definite wavelength associated with them
 (B) The higher the momentum, the longer is the wavelength
 (C) The faster the particle, the shorter is the wavelength
 (D) For the same velocity, a heavier particle has a shorter wavelength

PHYSICS FOR JEE MAINS & ADVANCED

47. When a monochromatic source of light is at a distance of 0.2 m from a photoelectric cell, the cut-off voltage and the saturation current are respectively 0.6 V and 18 mA. If the same source is placed 0.6 m away from the cell, then :
- (A) the stopping potential will be 0.2 V
(B) the stopping potential will be 1.8 V
(C) the saturation current will be 6.0 mA
(D) the saturation current will be 2.0 mA
48. In a photoelectric experiment, the frequency and intensity of a light source are both doubled. Then consider the following statements.
- (i) The saturation photocurrent remains almost the same.
(ii) The maximum kinetic energy of the photoelectrons is doubled.
- (A) Both (i) and (ii) are true
(B) (i) is true but (ii) is false
(C) (i) is false but (ii) is true
(D) both (i) and (ii) are false
49. An X-ray photon of wavelength λ and frequency ν collides with an initially stationary electron (but free to move) and bounces off. If λ' and ν' are respectively the wavelength and frequency of the scattered photon, then :
- (A) $\lambda' = \lambda; \nu' = \nu$ (B) $\lambda' < \lambda; \nu' > \nu$ (C) $\lambda' > \lambda; \nu' > \nu$ (D) $\lambda' > \lambda; \nu' < \nu$
50. An X-ray tube is operated at 66 kV. Then, in the continuous spectrum of the emitted X-rays :
- (A) wavelengths 0.01 nm and 0.02 nm will both be present
(B) wavelengths 0.01 nm and 0.02 nm will both be absent
(C) wavelength 0.01 nm will be present but wavelength 0.02 nm will be absent
(D) wavelength 0.01 nm will be absent but wavelength 0.02 nm will be present
51. A cesium photo cell, with a steady potential difference of 60 volt across it, is illuminated by a small bright light placed 50 cm away. When the same light is placed one meter away, the photoelectrons emerging from the photo cell : (assume that potential difference applied is sufficient to produce saturation current)
- (A) each carry one quarter of their previous energy
(B) each carry one quarter of their previous momentum
(C) are half as numerous
(D) are one quarter as numerous
52. The work function for aluminium surface is 4.2 eV and that for sodium surface is 2.0 eV. The two metals were illuminated with appropriate radiations so as to cause photo emission. Then :
- (A) Both aluminium and sodium will have the same threshold frequency
(B) The threshold frequency of aluminium will be more than that of sodium
(C) The threshold frequency of aluminium will be less than that of sodium
(D) The threshold wavelength of aluminium will be more than that of sodium
53. Let ν_1 be the frequency of the series limited of the Lyman series, ν_2 be the frequency of the first line of the Lyman series, and ν_3 be the frequency of the series limited of the Balmer series.
- (A) $\nu_1 - \nu_2 = \nu_3$ (B) $\nu_2 - \nu_1 = \nu_3$ (C) $\nu_3 = \frac{1}{2}(\nu_1 + \nu_2)$ (D) $\nu_1 + \nu_2 = \nu_3$

54. A point source causes photoelectric effect from a small metal plate. Which of the following curves may represent the saturation photocurrent as a function of the distance between the source and the metal?



55. A point source of light is used in a photoelectric effect. If the source is moved toward the emitting metal, the stopping potential

- (A) will increase (B) will decrease
(C) will remain constant (D) will either increase or decrease

56. The energy difference between the first two levels of hydrogen atom is 10.2 eV. What is the corresponding energy difference for a singly ionized helium atom ?

- (A) 10.2 eV (B) 20.4 eV (C) 40.8 eV (D) 81.6 eV

57. The innermost orbit of the hydrogen atom has a diameter of 1.06 Å. What is the diameter of the tenth orbit?

- (A) 5.3 Å (B) 10.6 Å (C) 53 Å (D) 106 Å

58. For the structural analysis of crystals, X-rays are used because :

- (A) X-rays have wavelength of the order of the inter-atomic spacing
(B) X-rays are highly penetrating radiations
(C) Wavelength of X-rays is of the order of nuclear size
(D) X-rays are coherent radiations

59. In a photoelectric experiment, with light of wavelength λ , the fastest electron has speed v . If the exciting wavelength is changed to $\frac{3\lambda}{4}$, the speed of the fastest emitted electron will become

- (A) $v\sqrt{\frac{3}{4}}$ (B) $v\sqrt{\frac{4}{3}}$ (C) less than $v\sqrt{\frac{3}{4}}$ (D) greater than $v\sqrt{\frac{4}{3}}$

60. An α particle with a kinetic energy of 2.1 eV makes a head on collision with a hydrogen in ground state atom moving towards it with a kinetic energy of 8.4 eV. The collision.

- (A) must be perfectly elastic (B) may be perfectly inelastic
(C) may be inelastic (D) must be perfectly inelastic

61. The photoelectrons emitted from a metal surface :

- (A) Are all at rest
(B) Have the same kinetic energy
(C) Have the same momentum
(D) Have speeds varying from zero up to a certain maximum value

62. An energy of 24.6 eV is required to remove one of the electrons from a neutral helium atom. The energy (In eV) required to remove both the electrons from a neutral helium atom is :

- (A) 38.2 (B) 49.2 (C) 51.8 (D) 79.0

Exercise # 2

Part # I

[Multiple Correct Choice Type Questions]

- Let A_n be the area enclosed by the n^{th} orbit in a hydrogen atom. The graph of $\ln(A_n / A_1)$ against $\ln(n)$
 - will pass through the origin
 - will have certain points lying on a straight line with slope 4
 - will be a monotonically increasing nonlinear curve
 - will be a circle
- When Z is doubled in an atom, which of the following statements are consistent with Bohr's theory?
 - Energy of a state is double
 - Radius of an orbit is doubled.
 - Velocity of electrons in an orbit is doubled.
 - Radius of an orbit is halved.
- Consider a metal used to produce some characteristic X-rays. Energy of X-rays are given by E and wavelength as represented by λ . Then which of the following is true :
 - $E(K_\alpha) > E(K_\beta) > E(K_\gamma)$
 - $E(M_\alpha) > E(L_\alpha) > E(K_\alpha)$
 - $\lambda(K_\alpha) > \lambda(K_\beta) > \lambda(K_\gamma)$
 - $\lambda(M_\alpha) > \lambda(L_\alpha) > \lambda(K_\alpha)$
- X-ray falling on a material
 - exerts a force on it
 - transfers energy to it
 - transfers momentum to it
 - transfers impulse to it
- The potential difference applied to an X-ray tube is increased. As a result, in the emitted radiation,
 - the intensity increases
 - the minimum wavelength increases
 - the intensity remains unchanged
 - the minimum wavelength decreases
- Photoelectric effect supports particle nature of light because
 - there is a minimum frequency below which no photoelectrons are emitted
 - the maximum kinetic energy of photoelectrons depends only on the frequency of light and is independent of intensity.
 - even when the metal surface is illuminated with very small intensity the photoelectrons (if $\nu \geq \nu_{\text{th}}$) leave the surface immediately
 - electric charge of the photoelectrons is quantized
- In an x-ray tube the voltage applied is 20KV. The energy required to remove an electron from L shell is 19.9 KeV. In the x-rays emitted by the tube ($hc = 12420 \text{ eV}\text{\AA}$)
 - minimum wavelength will be 62.1 pm
 - energy of the characteristic x-rays will be equal to or less than 19.9 KeV
 - L_α x-ray may be emitted
 - L_α x-ray will have energy 19.9 KeV
- Select the correct alternative(s):
 When photons of energy 4.25 eV strike the surface of a metal A, the ejected photo electrons have maximum kinetic energy T_A eV and de Broglie wave length λ_A . The maximum kinetic energy of photo electrons liberated from another metal B by photons of energy 4.70 eV is $T_B = (T_A - 1.50)$ eV. If the de-Broglie wave length of these photo electrons is $\lambda_B = 2\lambda_A$, then:
 - the work function of A is 2.25 eV
 - the work function of B is 4.20 eV
 - $T_A = 2.00$ eV
 - $T_B = 2.75$ eV

In each of the following questions, a statement of Assertion (A) is given followed by a corresponding statement of Reason (R) just below it. Of the statements mark the correct answer as

- (A) Statement-1 is True, Statement-2 is True; Statement-2 is a correct explanation for Statement-1
- (B) Statement-1 is True, Statement-2 is True; Statement-2 is NOT a correct explanation for Statement-1
- (C) Statement-1 is True, Statement-2 is False
- (D) Statement-1 is False, Statement-2 is True.

1. **Statement-1 :** When a beam of highly energetic neutrons is incident on a tungsten target, no X-rays will be produced.
Statement-2 : Neutrons do not exert any electrostatic force on electrons or nucleus of an atom.
2. **Statement-1 :** Work function of aluminium is 4.2 eV. Emission of electrons will not be possible if two photons each of energy 2.5 eV collide with free electrons of aluminium.
Statement-2 : For photoelectric emission the energy of each photon should be greater than or equal to the work function of aluminium.
3. **Statement-1 :** Though light of a single frequency (monochromatic light) is incident on a metal, the kinetic energies of all the emitted photoelectrons are different.
Statement-2 : The energy of electrons just after they absorb photons incident on metal surface may be lost in collision with other atoms in the metal before the electron is ejected out of the metal.
4. **Statement-1 :** In the duration electron jumps from first excited state to ground state in a stationary isolated hydrogen atom, angular momentum of the electron about the nucleus is conserved.
Statement-2 : As the electron jumps from first excited state to ground state, in a hydrogen atom, the electrostatic force on electron is always directed towards the nucleus.

Exercise # 3

Part # I

[Matrix Match Type Questions]

1. The energy, the magnitude of linear momentum, magnitude of angular momentum and orbital radius of an electron in a hydrogen atom corresponding to the quantum number n are E , p , L and r respectively. Then according to Bohr's theory of hydrogen atom, match the expressions in column-I with statement in column-II.

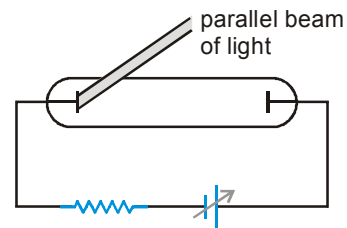
Column-I

- (A) Epr
- (B) $\frac{p}{E}$
- (C) Er
- (D) pr

Column-II

- (P) is independent of n .
- (Q) is directly proportional to n
- (R) is inversely proportional to n .
- (S) is directly proportional to L .

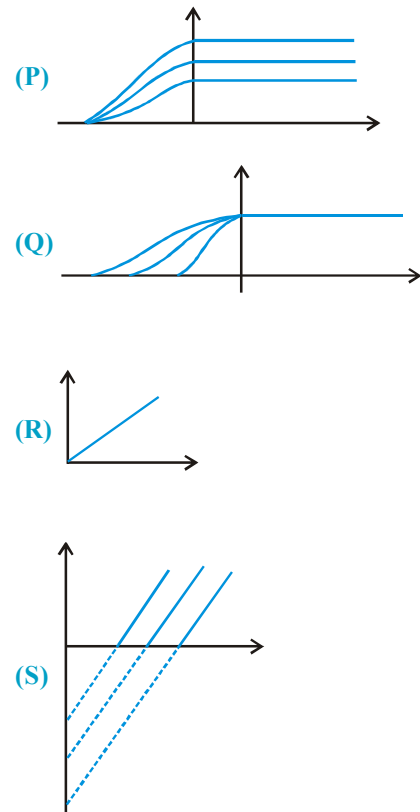
2. In the shown experimental setup to study photoelectric effect, two conducting electrodes are enclosed in an evacuated glass-tube as shown. A parallel beam of monochromatic radiation, falls on photosensitive electrode. Assume that for each photons incident, a photoelectron is ejected if its energy is greater than work function of electrode. Match the statements in column I with corresponding graphs in column II.



Column-I

- (A) Saturation photocurrent (for same metal) versus intensity of radiation is represented by
- (B) Maximum kinetic energy of ejected photoelectrons versus frequency for electrodes of different work function is represented by
- (C) Photo current versus applied voltage for different intensity of radiation (for same metal) is represented by
- (D) Photo current versus applied voltage at constant intensity of radiation for electrodes of different work function.

Column-II



3. In each situation of column I a physical quantity related to orbiting electron in a hydrogen like atom is given. The terms 'Z' and 'n' given in column-II have usual meaning in Bohr's theory. Match the quantities in column-I with the terms those depend on quantity given in column-II.

Column I

- (A) Frequency of orbiting electron
- (B) Angular momentum of orbiting electron
- (C) Magnetic moment of orbiting electron
- (D) The average current due to orbiting of electron

Column II

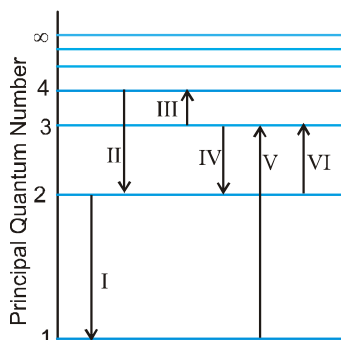
- (P) is directly proportional to Z^2
- (Q) is directly proportional to n.
- (R) is inversely proportional to n^3
- (S) is independent of Z

Part # II

[Comprehension Type Questions]

Comprehension # 1

The figure shows an energy level diagram for the hydrogen atom. Several transitions are marked as I, II, III, _____. The diagram is only indicative and not to scale.



1. In which transition is a Balmer series photon absorbed ?
 (A) II (B) III (C) IV (D) VI
2. The wavelength of the radiation involved in transition II is
 (A) 291 nm (B) 364 nm (C) 487 nm (D) 652 nm
3. Which transition will occur when a hydrogen atom is irradiated with radiation of wavelength 103nm?
 (A) I (B) II (C) IV (D) V

Comprehension # 2

A physicist wishes to eject electrons by shining light on a metal surface. The light source emits light of wavelength of 450 nm. The table lists the only available metals and their work functions.

Metal	W_0 (eV)
Barium	2.5
Lithium	2.3
Tantalum	4.2
Tungsten	4.5

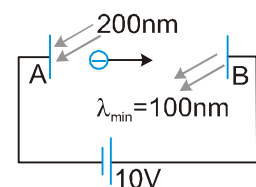
1. Which metal(s) can be used to produce electrons by the photoelectric effect from given source of light?
 (A) Barium only (B) Barium or lithium
 (C) Lithium, tantalum or tungsten (D) Tungsten or tantalum
2. Which option correctly identifies the metal that will produce the most energetic electrons and their energies?
 (A) Lithium, 0.45 eV (B) Tungsten, 1.75 eV
 (C) Lithium, 2.30 eV (D) Tungsten, 2.75 eV
3. Suppose photoelectric experiment is done separately with these metals with light of wavelength 450 nm. The maximum magnitude of stopping potential amongst all the metals is
 (A) 2.75 volt (B) 4.5 volt (C) 0.45 volt (D) 0.25 volt

Exercise # 4

[Subjective Type Questions]

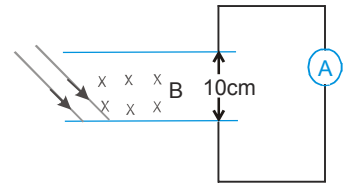
- The electric field associated with a monochromatic light is given by $E = E_0 \sin(1.2 \times 10^{15} \pi t - kx)$. Find the maximum kinetic energy of the photoelectrons when this light falls on a metal surface whose work function is 2.0 eV.
- When a light of wavelength 400 nm falls on a metal of workfunction 2.5 eV, what will be the maximum magnitude of linear momentum of emitted photoelectron?
- One milliwatt of light of wavelength $\lambda = 4560 \text{ \AA}$ is incident on a cesium metal surface. Calculate the electron current liberated. Assume a quantum efficiency of $\eta = 0.5 \%$. [work function for cesium = 1.89 eV] Take $hc = 12400 \text{ eV}\cdot\text{\AA}$.
- The magnetic field at a point associated with a light wave is $B = 2 \times 10^{-6} \text{ Tesla} \sin[(3.0 \times 10^{15} \text{ s}^{-1})t] \sin[(6.0 \times 10^{15} \text{ s}^{-1})t]$. If this light falls on a metal surface having a work function of 2.0 eV, what will be the maximum kinetic energy of the photoelectrons?
- Suppose the wavelength of the incident light is increased from 3000 \AA to 3040 \AA . Find the corresponding change in the stopping potential. [Take the product $hc = 12.4 \times 10^{-7} \text{ eV m}$]
- A sodium lamp of power 10 W is emitting photons of wavelength 590 nm. Assuming that 60% of the consumed energy is converted into light, find the number of photons emitted per second by the lamp.
- A beam of white light is incident normally on a plane surface absorbing 70% of the light and reflecting the rest. If the incident beam carries 30 W of power, find the force exerted by it on the surface.
- A parallel beam of monochromatic light of wavelength 663 nm is incident on a totally reflecting plane mirror. The angle of incidence is 60° and the number of photons striking the mirror per second is 5×10^{19} . Calculate the force exerted by the light beam on the mirror. ($h = 6.63 \times 10^{-34} \text{ J}\cdot\text{s}$)
- Photo electrons are liberated by ultraviolet light of wavelength 3000 \AA from a metallic surface for which the photoelectric threshold wavelength is 4000 \AA . Calculate the de Broglie wavelength of electrons emitted with maximum kinetic energy.
- Find the radius and energy of a He^+ ion in the states (a) $n = 2$, (b) $n = 3$.
- Two identical nonrelativistic particles move at right angles to each other, possessing De Broglie wavelengths, λ_1 & λ_2 . Find the De Broglie wavelength of each particle in the frame of their centre of mass.
- Find the numerical value of DeBroglie wavelength of an electron in the 1st orbit of hydrogen atom assuming Bohr's atomic model. You can use standard values of the constants. Leave your answer in terms of π .
- Find the temperature at which the average kinetic energy of the molecules of hydrogen equals the binding energy of its electron in ground state, assuming average kinetic energy of hydrogen gas molecule = $\frac{3}{2} kT$.
- A positive hydrogen like ion having electron at its ground state ejects it, if a photon of wavelength 228 \AA or less is absorbed by it. Identify the ion.
- Find the smallest wavelength in emission spectra of (A) hydrogen, (B) He^+
- A monochromatic light source of frequency ν illuminates a metallic surface and ejects photoelectrons. The photoelectrons having maximum energy are just able to ionize the hydrogen atoms in ground state. When the whole experiment is repeated with an incident radiation of frequency $\left(\frac{5}{6}\right)\nu$ the photoelectrons so emitted are able to excite the hydrogen atom beam which then emits a radiation of wavelength of 1215 \AA . Find the frequency ν .

17. Calculate the angular frequency of revolution of an electron occupying the second Bohr orbit of He^+ ion.
18. Consider a gas of hydrogen like ions in a excited state A. It emits photons having wavelength equal to the wavelength of the first line of the lyman series together with photons of five other wavelengths. Identify the gas and find the principal quantum number of the state A.
19. Find the quantum number n corresponding to the excited state of He^+ ion, if on transition to the ground state that ion emits two photons in succession with wave lengths 108.5 and 30.4 nm.
20. From the condition of the foregoing problem, find how much (in %) the energy of the emitted photon differs from the energy of the corresponding transition in a hydrogen atom.
21. A stationary hydrogen atom emits a photon corresponding to first line of the Lyman series. What velocity does the atom acquire ?
22. At what minimum kinetic energy must a hydrogen atom move for it's inelastic headon collision with another stationary hydrogen atom so that one of them emits a photon? Both atoms are supposed to be in the ground state prior to the collision.
23. Consider a gas consisting Li^{+2} (which is hydrogen like ion).
 - (A) Find the wavelength of radiation required to excite the electron in Li^{++} from $n = 1$ and $n = 3$. (Ionisation energy of the hydrogen atom equals 13.6 eV).
 - (B) How many spectral lines are observed in the emission spectrum of the above excited system ?
24. If the operating potential in an X -ray tube is increased by 0.1%, by what percentage does the cutoff wavelength decrease?
25. Find the cutoff wavelength for the continuous X-rays coming from an X-ray tube operating at 40 kV.
26. On increasing the operating voltage in a x-ray tube by 1.5 times, the shortest wavelength decreases by 26 pm. Find the original value of operating voltage.
27. Find the wavelength of the K_{α} line in copper ($Z = 29$), if the wave length of the K_{α} line in iron ($Z = 26$) is known to be equal to 193 pm. (Take $b = 1$)
28. An X-ray tube operates at 20 kV. Suppose the electron converts 70% of its energy into a photon at each collision. Find the lowest three wavelength emitted from the tube. Neglect the energy imparted to the atom with which the electron collides.
29. In an experiment on photoelectric effect, light of wavelength 800 nm (less than threshold wavelength) is incident on a cesium plate at the rate of 5.0 W .The potential of the collector plate is made sufficiently positive with respect to the emitter so that the current reaches its saturation value .Assuming that on the average one of every 10^6 photons is able to eject a photoelectron, find the photo current in the circuit.
30. An electron beam of energy 10 KeV is incident on metallic foil. If the interatomic distance is 0.55\AA . Find the angle of diffraction.
31. In the figure shown electromagnetic radiations of wavelength 200nm are incident on the metallic plate A. The photo electrons are accelerated by a potential difference 10V. These electrons strike another metal plate B from which electromagnetic radiations are emitted. The minimum wavelength of the emitted photons is 100nm. Find the work function of the metal 'A'. use $hc = 12400 \text{ eV}\text{\AA}$,



PHYSICS FOR JEE MAINS & ADVANCED

32. In an experiment on photoelectric effect, the separation between emitter and the collector plates is 10 cm. Plates are connected through an ammeter without any cell. A Magnetic field B exists parallel to the plates. The work function of the emitter is 2.39 eV and the light of wavelengths between 400 nm and 600 nm is incident on it. Find minimum value of B for which the current registered by the ammeter is zero. Neglect any effect of space charge. (assume emission of photo electron to be randomly every possible direction)



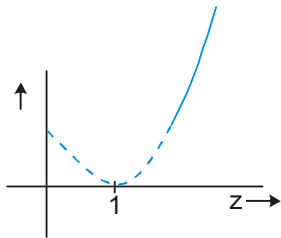
33. A light beam of wavelength 400 nm is incident on a metal plate of work function 2.2 eV. A particular electron absorbs a photon and makes some collisions before coming out of the metal. Assuming that 10% of the instantaneous energy is lost to the metal in each collision. (a) Find the kinetic energy of a electron which makes two collisions as it comes out of the metal (b) Under the same assumptions find the minimum number of collisions the electron can suffer before it becomes unable to come out of metal. (use $hc = 12400 \text{ eV \AA}$)
34. Assume that the de Broglie wave associated with an electron can form a standing wave between the atoms arranged in a one dimensional array with nodes at each of the atomic sites. It is found that one such standing wave is formed if the distance 'd' between the atoms of the array is 2 \AA . A similar standing wave is again formed if 'd' is increased to 2.5 \AA but not for any intermediate value of d. Find the energy of the electrons in electron volts and the least value of d for which the standing wave of the type described above can form.
35. Intensity of sunlight falling normally on the earth surface is $1.4 \times 10^3 \text{ W/m}^2$. Assume that the light is monochromatic with average wavelength 5000 \AA and that no light is absorbed in between the sun and the earth's surface. The distance between the sun and the earth is $1.5 \times 10^{11} \text{ m}$.
- Calculate the number of the photons falling per second on each square meter of earth's surface directly below the sun.
 - How many photons are there in each cubic meter near the earth's surface at any instant ?
 - How many photons does the sun emits per second ?
36. Calculate the magnetic field strength at the centre of a hydrogen atom caused by an electron moving along the first Bohr orbit.
37. A uniform magnetic field B exists in a region. An electron is given velocity perpendicular to the magnetic field. Assuming Bohr's quantization rule for angular momentum. Calculate
- the smallest possible radius of the electron
 - the radius of the n th orbit and
 - the minimum possible speed of the electron.
38. Consider Bohr's theory for hydrogen atom. The magnitude of angular momentum, orbit radius and frequency of the electron in n^{th} energy state in a hydrogen atom are ℓ , r & f respectively. Find out the value of 'x', if (fr/ℓ) is directly proportional to n^x .
39. Suppose the potential energy between electron and proton at a distance r is given by $U = ke \ln \frac{r}{a}$, where $r < a$ and k, e, a are positive constants. Use Bohr's theory to obtain the energy of n th energy level for such an atom.
40. The ionization energy of a hydrogen like Bohr atom is 4 Rydberg.
- What is the wavelength of radiation emitted when the electron jumps from the first excited state to the ground state?
 - What is the radius of the first orbit of this atom ?
(Bohr radius of hydrogen = $5 \times 10^{-11} \text{ m}$; 1 Rydberg = $2.2 \times 10^{-18} \text{ J}$)

41. Radiation from a hydrogen discharge tube (energy of photons ≤ 13.6 eV) goes through a filter which transmits only waves of wavelength greater than 4400 \AA and is incident on a metal of work function 2.0 eV. Find the stopping potential which can stop the photoelectrons.
42. A sample of hydrogen atom gas contains 100 atoms. All the atoms are excited to the same n^{th} excited state. The total energy released by all the atoms is $\frac{4800}{49} R_{\text{ch}}$ (where $R_{\text{ch}} = 13.6$ eV), as they come to the ground state through various types of transitions. Find
 (i) maximum energy of the emitted photon
 (ii) n
 (iii) maximum total number of photons that can be emitted by this sample.
43. Consider a hypothetical hydrogen like atom. The wavelength in \AA for the spectral lines for transition from $n = p$ to $n = 1$ are given by -

$$\lambda = \frac{1500p^2}{p^2 - 1} \quad \text{where } p = 2, 3, 4, \dots \text{ (given } hc = 12400 \text{ eV/\AA)}$$
 (a) Find the wavelength of the least energies and the most energetic photons in this series.
 (b) Construct an energy level diagram for this element representing at least three energy levels.
 (c) What is the ionisation potential of this element?
44. A neutron moving with a speed v strikes a hydrogen atom in ground state moving towards it with the same speed. Find the minimum speed of the neutron for which elastic collision does not take place. The mass of neutron = mass of hydrogen = $1.67 \times 10^{-27} \text{ kg}$
45. A positronium consists of an electron and a positron revolving about their common centre of mass. Derive and calculate
 (i) Separation between the electron and positron in their first excited state.
 (ii) Kinetic energy of the electron in ground state.
46. In an X-ray tube the accelerating voltage is 20 KV . Two targets A and B are used one by one. For 'A' the wavelength of the K_{α} line is 62 pm . For 'B' the wavelength of the L_{α} line is 124 pm . The energy of the 'B' ion with vacancy in 'M' shell is 5.5 KeV higher than the atom of B. [Take $hc = 12400 \text{ eV\AA}$]
 (i) Find λ_{min} in \AA .
 (ii) Can K_{α} - photon be emitted by 'A'? Explain with reason.
 (iii) Can L - photons be emitted by 'B'? What is the minimum wavelength (in \AA) of the characteristic X-ray that will be emitted by 'B'.
47. A neutron beam, in which each neutron has same kinetic energy, is passed through a sample of hydrogen like gas (but not hydrogen) in ground state. Due to collision of neutrons with the ions of the gas, ions are excited and then they emit photons. Six spectral lines are obtained in which one of the lines is of wavelength $(6200/51) \text{ nm}$. (a) Which gas is this? (b) What is the minimum possible value of kinetic energy of the neutrons for this to be possible. The mass of neutron and proton can be assumed to be nearly same. Use $hc = 12400 \text{ eV\AA}$.
48. A free atom of iron emits a photon of energy 6.4 keV . Then find the recoil kinetic energy of the atom. (Take mass of iron atom = $9.3 \times 10^{-26} \text{ kg}$).

PHYSICS FOR JEE MAINS & ADVANCED

49. Figure shows the variation of frequency of a characteristic x-ray and atomic number.
- Name the characteristic x-ray
 - Find the energy of photon emitted when this x-ray is emitted by a metal having $z = 101$.



50. A hydrogen like atom (atomic number Z) is in a higher excited state of quantum number n . This excited atom can make a transition to the first excited state by successively emitting two photons of energies 10.20 eV & 17.00 eV respectively. Alternatively, the atom from the same excited state can make a transition to the second excited state by successively emitting two photons of energies 4.25 eV & 5.95 eV respectively. Determine the values of n & Z . (Ionization energy of hydrogen atom = 13.6 eV)
51. The k_{β} x-ray of argon has a wavelength of 0.36 nm. The minimum energy required to take out the outermost electron from argon atom is 16 eV. Find the energy needed to knock out an electron from the K shell of an argon.
52. In a photo electric effect set – up, a point source of light of power 3.2×10^{-3} W emits mono energetic photons of energy 5.0 eV. The source is located at a distance of 0.8 m from the centre of a stationary metallic sphere of work function 3.0 eV & of radius 8.0×10^{-3} m. The efficiency of photo electrons emission is one for every 10^6 incident photons. Assume that the sphere is isolated and initially neutral, and that photo electrons are instantly swept away after emission.
- Calculate the number of photo electrons emitted per second.
 - Find the ratio of the wavelength of incident light to the De – Broglie wave length of the fastest photo electrons emitted.
 - It is observed that the photo electron emission stops at a certain time t after the light source is switched on. Why?
 - Evaluate the time t .

Exercise # 5

Part # I

[Previous Year Questions] [AIEEE/JEE-MAIN]

1. Two identical, photocathodes receive light of frequencies f_1 and f_2 . If the velocities of the photoelectrons (of mass m) coming out are respectively v_1 and v_2 , then : [AIEEE 2003]

(1) $v_1^2 - v_2^2 = \frac{2h}{m}(f_1 - f_2)$

(2) $v_1 - v_2 = \left[\frac{2h}{m}(f_1 + f_2) \right]^{1/2}$

(3) $v_1^2 - v_2^2 = \frac{2h}{m}(f_1 + f_2)$

(4) $v_1 - v_2 = \left[\frac{2h}{m}(f_1 - f_2) \right]^{1/2}$

2. The wavelength involved in the spectrum of deuterium (${}^2\text{D}$) are slightly different from that of hydrogen spectrum, because : [AIEEE 2003]

(1) size of the two nuclei are different

(2) nuclear forces are different in the two cases

(3) masses of the two nuclei are different

(4) attraction between the electron and the nucleus is different in the two cases

3. If the binding energy of the electron in a hydrogen atom is 13.6 eV, the energy required to remove the electron from the first excited state of Li^{2+} is : [AIEEE 2003]

(1) 30.6 eV

(2) 13.6 eV

(3) 13.6 eV

(4) 122.4 eV

4. In Bohr series of lines of hydrogen spectrum, the third line from the red end corresponds to which one of the following inter-orbit jumps of the electron for Bohr orbits is an atom of hydrogen ? [AIEEE 2003]

 (1) $3 \rightarrow 2$

 (2) $5 \rightarrow 2$

 (3) $4 \rightarrow 1$

 (4) $2 \rightarrow 5$

5. The de Broglie wavelength of a tennis ball of mass 60 g moving with a velocity of 10 metres per second is approximately - (Planck's constant, $h = 6.63 \times 10^{-34}$ Js) [AIEEE 2003]

 (1) 10^{-33} metre

 (2) 10^{-31} metre

 (3) 10^{-16} metre

 (4) 10^{-25} metre

6. The orbital angular momentum for an electron revolving in an orbit is given by $\sqrt{\ell(\ell+1)} \frac{h}{2\pi}$. This momentum for an s-electron will be given by - [AIEEE 2003]

(1) $+\frac{1}{2} \cdot \frac{h}{2\pi}$

(2) zero

(3) $\frac{h}{2\pi}$

(4) $\sqrt{2} \cdot \frac{h}{2\pi}$

7. A radiation of energy E falls normally on a perfectly reflecting surface. The momentum transferred to the surface is: [AIEEE 2004]

 (1) E/c

 (2) $2E/c$

 (3) Ec

 (4) E/c^2

8. According to Einstein's photoelectric equation, the plot of the kinetic energy of the emitted photoelectrons from a metal Vs then frequency, of the incident radiation gives a straight line whose slope : [AIEEE 2004]

(1) depends on the nature of the metal used

(2) depends on the intensity of the radiation

(3) depends both on the intensity of the radiation and the metal used

(4) is the same for all metals and independent of the intensity of the radiation

PHYSICS FOR JEE MAINS & ADVANCED

9. The work function of a substance is 4.0 eV. The longest wavelength of light that can cause photoelectron emission from this substance is approximately : [AIEEE 2004]
 (1) 540 nm (2) 400 nm (3) 310 nm (4) 220 nm
10. The intensity of gamma radiation from a given source is I. On passing through 36 mm of lead, it is reduced to 1/8. The thickness of lead, which will reduce the intensity to 1/2 will be : [AIEEE 2005]
 (1) 6 mm (2) 9 mm (3) 18 mm (4) 12 mm
11. A photocell is illuminated by a small bright source placed 1 m away. When the same source of light is placed $\frac{1}{2}$ m away, the number of electrons emitted by photocathode would : [AIEEE 2005]
 (1) decrease by a factor of 4 (2) increase by a factor of 4
 (3) decrease by a factor of 2 (4) increase by a factor of 2
12. The diagram shows the energy levels for an electron in a certain atom. Which transition shown represents the emission of a photon with the most energy? [AIEEE 2005]
 (1) III
 (2) IV
 (3) I
 (4) II
-
13. If the kinetic energy of a free electron doubles, its de-Broglie wavelength changes by the factor : [AIEEE 2005]
 (1) $\frac{1}{2}$ (2) 2 (3) $\frac{1}{\sqrt{2}}$ (4) $\sqrt{2}$
14. The time by a photoelectron to come out after the photon strikes is approximately [AIEEE 2006]
 (1) 10^{-1} s (2) 10^{-4} s (3) 10^{-10} s (4) 10^{-16} s
15. An alpha nucleus of energy $\frac{1}{2}mv^2$ bombards a heavy nuclear target of charge Ze. Then the distance of closest approach for the alpha nucleus will be proportional to : [AIEEE 2006]
 (1) $\frac{1}{Ze}$ (2) v^2 (3) $\frac{1}{m}$ (4) $\frac{1}{v^4}$
16. The threshold frequency for a metallic surface corresponds to an energy of 6.2 eV, and the stopping potential for a radiation incident on this surface 5 V. The incident radiation lies in [AIEEE 2006]
 (1) X-ray region (2) ultra-violet region (3) infra-red region (4) visible region
17. The anode voltage of a photocell is kept fixed. The wavelength of the light falling on the cathode is gradually changed. The plate current I of the photocell varies as follows : [AIEEE 2006]
-
18. Photon of frequency ν has a momentum associated with it. If c is the velocity of light, the momentum is: [AIEEE 2007]
 (1) ν/c (2) $h\nu c$ (3) $h \nu/c^2$ (4) $h \nu/c$
19. Which of the following transitions in hydrogen atoms emit photons of highest frequency ? [AIEEE 2007]
 (1) $n=2$ to $n=6$ (2) $n=6$ to $n=2$ (3) $n=2$ to $n=1$ (4) $n=1$ to $n=2$

20. Suppose an electron is attracted towards the origin by a force $\frac{k}{r}$ where 'k' is a constant and 'r' is the distance of the electron from the origin. By applying Bohr model to this system, the radius of the nth orbital of the electron is found to be ' r_n ' and the kinetic energy of the electron to be ' T_n '. Then which of the following is true? [AIEEE 2008]
- (1) T_n independent of n, r_n , (2) $T_n \propto \frac{1}{n}, r_n \propto n$
 (3) $T_n \propto \frac{1}{n}, r_n \propto n^2$ (4) $T_n \propto \frac{1}{n^2}, r_n \propto n^2$
21. The transition from the state $n=4$ to $n=3$ in a hydrogen like atom results in ultraviolet radiation. Infrared radiation will be obtained in the transition from: [AIEEE 2009]
- (1) $3 \rightarrow 2$ (2) $4 \rightarrow 2$ (3) $5 \rightarrow 4$ (4) $2 \rightarrow 1$
22. The surface of a metal is illuminated with the light of 400 nm. The kinetic energy of the ejected photoelectrons was found to be 1.68 eV. The work function of the metal is : ($hc = 1240 \text{ eV}\cdot\text{nm}$) [AIEEE 2009]
- (1) 1.41 eV (2) 1.51 eV (3) 1.68 eV (4) 3.09 eV
23. **Statement-1** : When ultraviolet light is incident on a photocell, its stopping potential is V_0 and the maximum kinetic energy of the photoelectrons is K_{max} . When the ultraviolet light is replaced by X-rays, both V_0 and K_{max} increase. [AIEEE 2010]
- Statement-2** : Photoelectrons are emitted with speeds ranging from zero to a maximum value because of the range of frequencies present in the incident light.
- (1) Statement-1 is true, Statement-2 is true; Statement-2 is the correct explanation of Statement-1.
 (2) Statement-1 is true, Statement-2 is true; Statement-2 is not the correct explanation of Statement-1
 (3) Statement-1 is false, Statement-2 is true.
 (4) Statement-1 is true, Statement-2 is false.
24. If a source of power 4 kW produces 10^{20} photons/second, the radiation belongs to a part of the spectrum called : [AIEEE 2010]
- (1) X-rays (2) ultraviolet rays (3) microwaves (4) γ -rays
25. Energy required for the electron excitation in Li^{++} from the first to the third Bohr orbit is : [AIEEE 2011]
- (1) 12.1 eV (2) 36.3 eV (3) 108.8 eV (4) 122.4 eV
26. This questions has Statement –1 and statement –2. Of the four choices given after the statements, choose the one that best describes the two statements : [AIEEE - 2011]
- Statement –1 :**
 A metallic surface is irradiated by a monochromatic light of frequency $\nu > \nu_0$ (the threshold frequency). The maximum kinetic energy and the stopping potential are K_{max} and V_0 respectively. If the frequency incident on the surface is doubled, both the K_{max} and V_0 are also doubled.
- Statement –2 :**
 The maximum kinetic energy and the stopping potential of photoelectrons emitted from a surface are linearly dependent on the frequency of incident light.
- (1) Statement –1 is true, statement –2 is false.
 (2) Statement –1 is true, Statement –2 is true, Statement –2 is the correct explanation of Statement –1
 (3) Statement –1 is true, Statement –2 is true, Statement –2 is not the correct explanation of Statement–1
 (4) Statement–1 is false, Statement –2 is true
27. After absorbing a slowly moving neutron of Mass m_N (momentum ≈ 0) a nucleus of mass M breaks into two nuclei of masses m_1 and $5m_1$ ($6m_1 = M + m_N$) respectively. If the de Broglie wavelength of the nucleus with mass m_1 is λ , the de Broglie wavelength of the nucleus will be: [AIEEE 2011]
- (1) 5λ (2) $\lambda/5$ (3) λ (4) 25λ

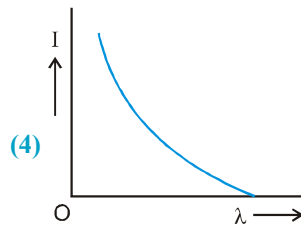
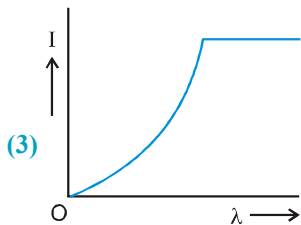
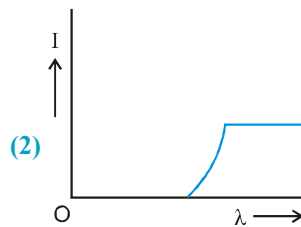
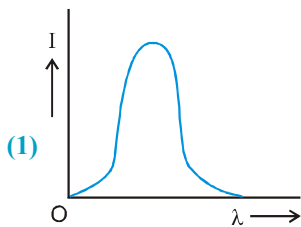
PHYSICS FOR JEE MAINS & ADVANCED

28. Hydrogen atom is excited from ground state to another state with principal quantum number equal to 4. Then the number of spectral lines in the emission spectra will be : [AIEEE 2012]
 (1) 2 (2) 3 (3) 5 (4) 6

29. A diatomic molecule is made of two masses m_1 and m_2 which are separated by a distance r . If we calculate its rotational energy by applying Bohr's rule of angular momentum quantization, its energy will be given by : (n is an integer) [AIEEE 2012]

(1) $\frac{(m_1 + m_2)^2 n^2 h^2}{2m_1^2 m_2^2 r^2}$ (2) $\frac{n^2 h^2}{2(m_1 + m_2)r^2}$ (3) $\frac{2n^2 h^2}{(m_1 + m_2)r^2}$ (4) $\frac{(m_1 + m_2)n^2 h^2}{2m_1 m_2 r^2}$

30. The anode voltage of a photocell is kept fixed. The wavelength λ of the light falling on the cathode is gradually changed. The plate current I of the photocell varies as follows : [JEE-Main 2013]



31. In a hydrogen like atom electron makes transition from an energy level with quantum number n to another with quantum number $(n-1)$. If $n \gg 1$, the frequency of radiation emitted is proportional to : [JEE-Main 2013]

(1) $\frac{1}{n}$ (2) $\frac{1}{n^2}$ (3) $\frac{1}{n^{3/2}}$ (4) $\frac{1}{n^3}$

32. Hydrogen (${}_1\text{H}^1$), Deuterium (${}_1\text{H}^2$), singly ionised Helium (${}_2\text{He}^4$) and doubly ionised lithium (${}_3\text{Li}^6$) all have one electron around the nucleus. Consider an electron transition from $n = 2$ to $n = 1$. If the wavelengths of emitted radiation are λ_1 , λ_2 , λ_3 and λ_4 respectively then approximately which one of the following is correct? [JEE-Main 2014]

(1) $\lambda_1 = \lambda_2 = 4\lambda_3 = 9\lambda_4$ (2) $\lambda_1 = 2\lambda_2 = 3\lambda_3 = 9\lambda_4$ (3) $4\lambda_1 = 2\lambda_2 = 2\lambda_3 = \lambda_4$ (4) $\lambda_1 = 2\lambda_2 = 2\lambda_3 = \lambda_4$

33. The radiation corresponding to $3 \rightarrow 2$ transition of hydrogen atom falls on a metal surface to produce photoelectrons. These electrons are made to enter a magnetic field of 3×10^{-4} T. If the radius of the largest circular path followed by these electrons is 10.0 mm, the work function of the metal is close to : [JEE-Main 2014]

(1) 0.8 eV (2) 1.6 eV (3) 1.8 eV (4) 1.1 eV

34. A red LED emits light at 0.1 watt uniformly around it. The amplitude of the electric field of the light at a distance of 1 m from the diode is : [JEE-Main 2015]

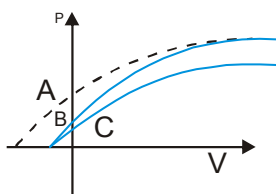
(1) 5.48 V/m (2) 7.75 V/m (3) 1.73 V/m (4) 2.45 V/m

35. An electron makes a transition from an excited state to the ground state of a hydrogen-like atom/ion : [JEE-Main 2015]
- (1) Kinetic energy decreases, potential energy increases but total energy remains same
 - (2) Kinetic energy and total energy decrease but potential energy increases
 - (3) Its kinetic energy increases but potential energy and total energy decrease.
 - (4) Kinetic energy, potential energy and total energy decrease
36. The temperature dependence of resistances of Cu and undoped Si in the temperature range 300–400 K, is best described by : [JEE-Main 2016]
- (1) Linear increase for Cu, exponential increase for Si.
 - (2) Linear increase for Cu, exponential decrease for Si.
 - (3) Linear decrease for Cu, linear decrease for Si.
 - (4) Linear increase for Cu, linear increase for Si.
37. Radiation of wavelength λ , is incident on a photocell. The fastest emitted electron has speed v , If the wavelength is changed to $\frac{3\lambda}{4}$, the speed of the fastest emitted electron will be : [JEE-Main 2016]
- (1) $< v \left(\frac{4}{3}\right)^{\frac{1}{2}}$
 - (2) $= v \left(\frac{4}{3}\right)^{\frac{1}{2}}$
 - (3) $= v \left(\frac{3}{4}\right)^{\frac{1}{2}}$
 - (4) $> v \left(\frac{4}{3}\right)^{\frac{1}{2}}$

Part # II

[Previous Year Questions][IIT-JEE ADVANCED]

1. The attractive potential between electron and nucleus is given by $v = v_0 \ell n \frac{r}{r_0}$, v_0 and r_0 are constants and 'r' is the radius. The radius 'r' of the nth Bohr's orbit depends upon principal quantum number 'n' as: [JEE 2003]
- (A) $r \propto n^2$
 - (B) $r \propto n$
 - (C) $r \propto \frac{1}{n}$
 - (D) $r \propto \frac{1}{n^2}$
2. If Bohr's theory is applicable to ${}_{100}\text{Fm}^{257}$, then radius of this atom in Bohr's unit is : [JEE 2003]
- (A) 4
 - (B) 1/4
 - (C) 100
 - (D) 200
3. In a photoelectric effect experiment, photons of energy 5 eV are incident on the photocathode of work function 3 eV. For photon intensity $I_A = 10^{15} \text{ m}^{-2} \text{ s}^{-1}$, saturation current of $4.0 \mu \text{ A}$ is obtained. Sketch the variation of photocurrent i_p against the anode voltage V_a in the figure below for photon intensity I_A (curve A) and $I_B = 2 \times 10^{15} \text{ m}^{-2} \text{ s}^{-1}$ (curve B) (in JEE graph was to be drawn in the answer sheet itself). [JEE 2003]
4. Characteristic X-rays of frequency $4.2 \times 10^{18} \text{ Hz}$ are emitted from a metal due to transition from L- to K-shell. Find the atomic number of the metal using Moseley's law. Take Rydberg constant $R = 1.1 \times 10^7 \text{ m}^{-1}$. [JEE 2003]
5. The graph is showing the photocurrent with the applied voltage of a photoelectric effect experiment. Then



PHYSICS FOR JEE MAINS & ADVANCED

- (A) A & B will have same intensity and B & C have same frequency
 (B) B & C have same intensity and A & B have same frequency
 (C) A & B will have same frequency and B & C have same intensity
 (D) A & C will have same intensity and B & C have same frequency [Jee 2004]

6. A proton and photon both have same energy of $E = 100 \text{ K eV}$. The de Broglie wavelength of proton and photon be λ_1 and λ_2 then λ_1/λ_2 is proportional to - [Jee 2004]

- (A) $E^{-1/2}$ (B) $E^{1/2}$ (C) E^{-1} (D) E

7. The photons from Balmer series in hydrogen spectrum having wavelength between 450 nm to 700 nm are incident on a metal surface of work function 2 eV. Find the maximum kinetic energy of one photo electron. [JEE 2004]

8. The wavelength of K_α X-ray of an element having atomic number $z = 11$ is λ . The wavelength of K_α X-ray of another element of atomic number z' is 4λ . Then z' is - [Jee 2005]

- (A) 11 (B) 44 (C) 6 (D) 4

9. A photon of 10.2 eV energy collides with a hydrogen atom in ground state inelastically. After few microseconds one more photon of energy 15 eV collides with the same hydrogen atom. Then what can be detected by a suitable detector. [JEE 2005]

- (A) one photon of 10.2 eV and an electron of energy 1.4 eV
 (B) 2 photons of energy 10.2 eV
 (C) 2 photons of energy 3.4 eV
 (D) 1 photon of 3.4 eV and one electron of 1.4 eV

10. The potential energy of a mass 'm' is given by the following relation

$$U = E_0 \text{ for } 0 \leq x \leq 1$$

$$= 0 \text{ for } x > 1$$

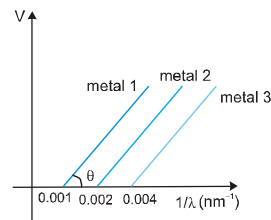
If λ_1 and λ_2 are the de-broglie wavelengths of the mass in the region $0 \leq x \leq 1$ and for $x > 1$ respectively and the total

energy be $2E_0$, then find the value of $\frac{\lambda_1}{\lambda_2}$? [JEE 2005]

11. The graph between $1/\lambda$ and stopping potential (V) of three metals having work functions ϕ_1, ϕ_2 and ϕ_3 in an experiment of photo-electric effect is plotted as shown in the figure. Which of the following statement(s) is/are correct

? [Here λ is the wavelength of the incident ray]. [JEE 2006]

- (A) Ratio of work functions $\phi_1 : \phi_2 : \phi_3 = 1 : 2 : 4$.
 (B) Ratio of work functions $\phi_1 : \phi_2 : \phi_3 = 4 : 2 : 1$.
 (C) $\tan\theta$ is directly proportional to hc/e , where h is Planck's constant and c is the speed of light.
 (D) The violet colour light can eject photoelectrons from metals 2 and 3.



12. If the wavelength of the n^{th} line of Lyman series is equal to the de-broglie wavelength of electron in initial orbit of a hydrogen like element ($z = 11$). Find the value of n . [JEE 2006]

13. The largest wavelength in the ultraviolet region of the hydrogen spectrum is 122 nm. The smallest wavelength in the infrared region of the hydrogen spectrum (to the nearest integer) is [JEE 2007]

- (A) 802 nm (B) 823 nm (C) 1882 nm (D) 1648 nm

14. **Statement-1** [JEE 2007]
 If the accelerating potential in an X-ray tube is increased, the wavelengths of the characteristic X-rays do not change.

Statement-2

When an electron beam strikes the target in an X-ray tube, part of the kinetic energy is converted into X-ray energy.

- (A) Statement-1 is True, Statement-2 is True; Statement-2 is a correct explanation for Statement-1
 (B) Statement-1 is True, Statement-2 is True; Statement-2 is NOT a correct explanation for Statement-1
 (C) Statement-1 is True, Statement-2 is False
 (D) Statement-1 is False, Statement-2 is True.
15. Electrons with de-Broglie wavelength λ fall on the target in an X-ray tube. The cut-off wavelength of the emitted X-rays is [JEE 2007]

(A) $\lambda_0 = \frac{2mc\lambda^2}{h}$ (B) $\lambda_0 = \frac{2h}{mc}$ (C) $\lambda_0 = \frac{2m^2c^2\lambda^3}{h^2}$ (D) $\lambda_0 = \lambda$

16. Which one of the following statements is WRONG in the context of X-rays generated from a X-ray tube? [JEE 2008]
- (A) Wavelength of characteristic X-rays decreases when the atomic number of the target increases
 (B) Cut-off wavelength of the continuous X-rays depends on the atomic number of the target
 (C) Intensity of the characteristic X-rays depends on the electrical power given to the X-ray tube
 (D) Cut-off wavelength of the continuous X-rays depends on the energy of the electrons in the X-ray tube

Paragraph :

In a mixture of H – He⁺ gas (He⁺ is singly ionized He atom), H atoms and He⁺ ions are excited to their respective first excited states. Subsequently, H atoms transfer their total excitation energy to He⁺ ions (by collisions). Assume that the Bohr model of atom is exactly valid. [IIT-JEE 2008]

17. The quantum number n of the state finally populated in He⁺ ions is :
 (A) 2 (B) 3 (C) 4 (D) 5
18. The wavelength of light emitted in the visible region by He⁺ ions after collisions with H atoms is
 (A) $6.5 \times 10^{-7} \text{m}$ (B) $5.6 \times 10^{-7} \text{m}$ (C) $4.8 \times 10^{-7} \text{m}$ (D) $4.0 \times 10^{-7} \text{m}$
19. The ratio of the kinetic energy of the n = 2 electron for the H atom to that of He⁺ ion is :
 (A) $\frac{1}{4}$ (B) $\frac{1}{2}$ (C) 1 (D) 2

Paragraph for Question Nos. 20 to 22

[IIT-JEE 2009]

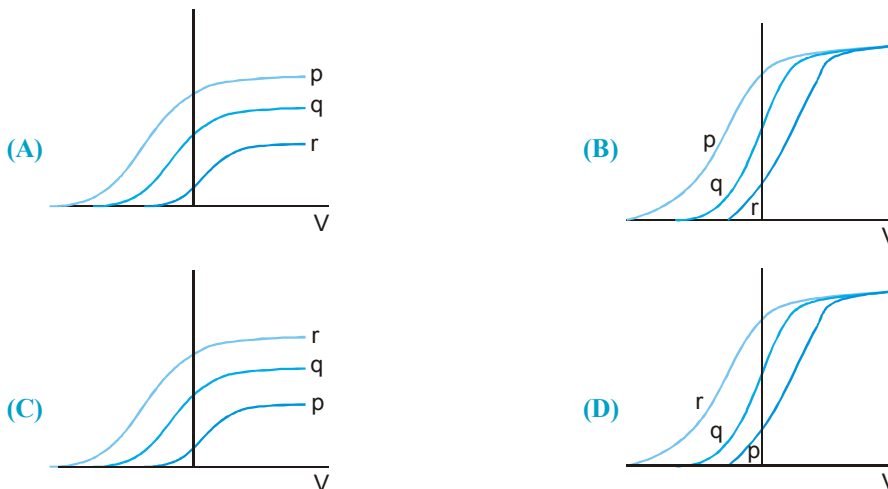
When a particle is restricted to move along x-axis between $x = 0$ and $x = a$, where a is of nanometer dimension, its energy can take only certain specific values. The allowed energies of the particle moving in such a restricted region, correspond to the formation of standing waves with nodes at its ends $x = 0$ and $x = a$. The wavelength of this standing wave is related to the linear momentum p of the particle according to the de-

Broglie relation. The energy of the particle of mass m is related to its linear momentum as $E = \frac{p^2}{2m}$. Thus, the energy of the particle can be denoted by a quantum number 'n' taking values 1,2,3,....., (n = 1, called the ground state) corresponding to the number of loops in the standing wave.

Use the model described above to answer the following three questions for a particle moving in the line $x = 0$ to $x = a$. Take $h = 6.6 \times 10^{-34} \text{ J s}$ and $e = 1.6 \times 10^{-19} \text{ C}$.

PHYSICS FOR JEE MAINS & ADVANCED

20. The allowed energy for the particle for a particular value of n is proportional to :
 (A) a^{-2} (B) $a^{-3/2}$ (C) a^{-1} (D) a^2
21. If the mass of the particle is $m = 1.0 \times 10^{-30}$ kg and $a = 6.6$ nm, the energy of the particle in its ground state is closest to :
 (A) 0.8 meV (B) 8 meV (C) 80 meV (D) 800 meV
22. The speed of the particle, that can take discrete values, is proportional to :
 (A) $n^{-3/2}$ (B) n^{-1} (C) $n^{1/2}$ (D) n
23. Photoelectric effect experiments are performed using three different metal plates p, q and r having work functions $\phi_p = 2.0$ eV, $\phi_q = 2.5$ eV and $\phi_r = 3.0$ eV respectively. A light beam containing wavelengths of 550 nm, 450 nm and 350 nm with equal intensities illuminates each of the plates. The correct I-V graph for the experiment is
 [Take $hc = 1240$ eV nm] [JEE 2009]



24. An α -particle and a proton are accelerated from rest by a potential difference of 100V. After this, their de-Broglie wavelength are λ_α and λ_p respectively. The ratio $\frac{\lambda_p}{\lambda_\alpha}$, to the nearest integer, is : [JEE 2010]

Paragraph for questions 25 to 27

The key feature of Bohr's theory of spectrum of hydrogen atom is the quantization of angular momentum when an electron is revolving around a proton. We will extend this to a general rotational motion to find quantized rotational energy of a diatomic molecule assuming it to be rigid. The rule to be applied is Bohr's quantization condition.

[JEE 2010]

25. A diatomic molecule has moment of inertia I . By Bohr's quantization condition its rotational energy in the n^{th} level ($n = 0$ is not allowed) is : [JEE 2010]
- (A) $\frac{1}{n^2} \left(\frac{h^2}{8\pi^2 I} \right)$ (B) $\frac{1}{n} \left(\frac{h^2}{8\pi^2 I} \right)$ (C) $n \left(\frac{h^2}{8\pi^2 I} \right)$ (D) $n^2 \left(\frac{h^2}{8\pi^2 I} \right)$
26. It is found that the excitation frequency from ground to the first excited state of rotation for the CO molecule is close to $\frac{4}{\pi} \times 10^{11}$ Hz. Then the moment of inertia of CO molecule about its centre of mass is close to (Take $h = 2\pi \times 10^{-34}$ J s) [JEE 2010]
- (A) 2.76×10^{-46} kg m² (B) 1.87×10^{-46} kg m² (C) 4.67×10^{-47} kg m² (D) 1.17×10^{-47} kg m²

27. In a CO molecule, the distance between C (mass = 12 a.m.u.) and O (mass = 16 a.m.u.), where $1 \text{ a.m.u.} = \frac{5}{3} \times 10^{-27} \text{ kg}$, is close to : [JEE 2010]
 (A) $2.4 \times 10^{-10} \text{ m}$ (B) $1.9 \times 10^{-10} \text{ m}$ (C) $1.3 \times 10^{-10} \text{ m}$ (D) $4.4 \times 10^{-11} \text{ m}$
28. The wavelength of the first spectral line in the Balmer series of hydrogen atom is 6561 Å. The wavelength of the second spectral line in the Balmer series of singly ionized helium atom is : [JEE 2010]
 (A) 1215 Å (B) 1640 Å (C) 2430 Å (D) 4687 Å

Paragraph for Question Nos. 29 and 30

A dense collection of equal number of electrons and positive ions is called neutral plasma. Certain solids containing fixed positive ions surrounded by free electrons can be treated as neutral plasma. Let 'N' be the number density of free electrons, each of mass 'm'. When the electrons are subjected to an electric field, they are displaced relatively away from the heavy positive ions. If the electric field becomes zero, the electrons begin to oscillate about the positive ions with a natural angular frequency ' ω_p ', which is called the plasma frequency. To sustain the oscillations, a time varying electric field needs to be applied that has an angular frequency ω , where a part of the energy is absorbed and a part of it is reflected. As ω approaches ω_p all the free electrons are set to resonance together and all the energy is reflected. This is the explanation of high reflectivity of metals. [JEE 2011]

29. Taking the electronic charge as 'e' and the permittivity as ' ϵ_0 ', use dimensional analysis to determine the correct expression for ω_p .

(A) $\sqrt{\frac{Ne}{m\epsilon_0}}$ (B) $\sqrt{\frac{m\epsilon_0}{Ne}}$ (C) $\sqrt{\frac{Ne^2}{m\epsilon_0}}$ (D) $\sqrt{\frac{m\epsilon_0}{Ne^2}}$

30. Estimate the wavelength at which plasma reflection will occur for a metal having the density of electrons $N \approx 4 \times 10^{27} \text{ m}^{-3}$. Take $\epsilon_0 \approx 10^{-11}$ and $m \approx 10^{-30}$, where these quantities are in proper SI units.

(A) 800 nm (B) 600 nm (C) 300 nm (D) 200 nm

31. A silver sphere of radius 1 cm and work function 4.7 eV is suspended from an insulating thread in free-space. It is under continuous illumination of 200 nm wavelength light. As photoelectrons are emitted, the sphere gets charged and acquires a potential. The maximum number of photoelectrons emitted from the sphere is $A \times 10^Z$ (where $1 < A < 10$). The value of 'Z' is [JEE 2011]

32. A pulse of light of duration 100 ns is absorbed completely by a small object initially at rest. Power of the pulse is 30mW and the speed of light is $3 \times 10^8 \text{ ms}^{-1}$. The final momentum of the object is:

[JEE-Advanced-2013]

(A) $0.3 \times 10^{-17} \text{ kg ms}^{-1}$ (B) $1.0 \times 10^{-17} \text{ kg ms}^{-1}$
 (C) $3.0 \times 10^{-17} \text{ kg ms}^{-1}$ (D) $9.0 \times 10^{-17} \text{ kg ms}^{-1}$

33. The work functions of Silver and Sodium are 4.6 and 2.3 eV, respectively. The ratio of the slope of the stopping potential versus frequency plot for Silver to that of Sodium is : [JEE-Advanced-2013]

34. The radius of the orbit of an electron in a Hydrogen-like atom is $4.5 a_0$, where a_0 is the Bohr radius. Its orbital angular momentum is $\frac{3h}{2\pi}$. It is given that h is Planck constant and R is Rydberg constant. The possible wavelength(s), when the atom de-excites, is (are) : [JEE-Advanced-2013]

(A) $\frac{9}{32R}$ (B) $\frac{9}{16R}$ (C) $\frac{9}{5R}$ (D) $\frac{4}{3R}$

35. If λ_{Cu} is the wavelength of K_α X-ray line of copper (atomic number 29) and λ_{Mo} is the wavelength of the K_α X-ray line of molybdenum (atomic number 42), then the ratio $\lambda_{Cu}/\lambda_{Mo}$ is close to [JEE-Advanced-2014]

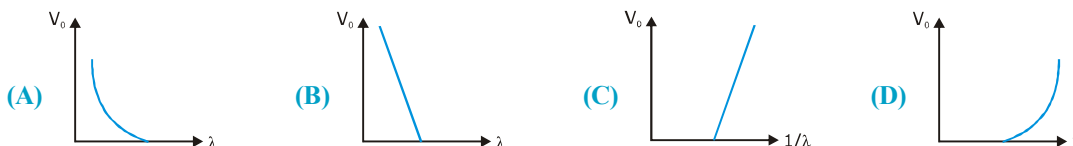
(A) 1.99 (B) 2.14 (C) 0.50 (D) 0.48

PHYSICS FOR JEE MAINS & ADVANCED

36. A metal surface is illuminated by light of two different wavelengths 248 nm and 310 nm. The maximum speeds of the photoelectrons corresponding to these wavelengths are u_1 and u_2 , respectively. If the ratio $u_1 : u_2 = 2 : 1$ and $hc = 1240 \text{ eV nm}$, the work function of the metal is nearly [JEE-Advanced-2014]
 (A) 3.7 eV (B) 3.2 eV (C) 2.8 eV (D) 2.5 eV

37. Consider a hydrogen atom with its electron in the n th orbital. An electromagnetic radiation of wavelength 90 nm is used to ionize the atom. If the kinetic energy of the ejected electron is 10.4 eV, then the value of n is ($hc = 1242 \text{ eV nm}$) [JEE-Advanced-2014]

38. For photo-electric effect with incident photon wavelength λ , the stopping potential is V_0 . Identify the correct variation(s) of V_0 with λ and $1/\lambda$.



39. An electron in an excited state of Li^{2+} ion has angular momentum $3h/2\pi$. The de Broglie wavelength of the electron in this state is $p\pi a_0$ (where a_0 is the Bohr radius). The value of p is - [JEE-Advanced-2015]

40. Light of wavelength of λ_{ph} falls on a cathode plate inside a vacume tube as shown in the figure. The work function of the cathode surface is ϕ and the anode is a wire mesh of conducting material kept at a distance d from the cathode. A potential difference V is maintained between the electrodes. If the minimum de Broglie wavelength of the electrons passing through the anode is λ_e , which of the following statemnet(s) is(are) true? [JEE-Advanced-2016]

- (A) λ_e decreases with increases in ϕ and λ_{ph}
 (B) λ_e is approximately halved, if d is doubled
 (C) For large potential difference ($V \gg \phi/e$), λ_e is approximately halved if V is made four times
 (D) λ_e increases at the same rate as λ_{ph} for $\lambda_{ph} < hc/\phi$

41. In a historical experiment to determine Planck's constant, a metal surface was irradiated with light of different wavelengths. The emitted photoelectron energies were measured by applying a stopping potential. The relevant data for the wavelength (μ) of incident light and the corresponding stopping potential (V_0) are given below:

$\lambda(\mu\text{m})$	$V_0(\text{Volt})$
0.3	2.0
0.4	1.0
0.5	0.4

Given that $c = 3 \times 10^8 \text{ ms}^{-1}$ and $e = 1.6 \times 10^{-19} \text{ C}$, Planck's constant (in units of J s) found from such an experiment is [JEE-Advanced-2016]

- (A) 6.0×10^{-34} (B) 6.4×10^{-34} (C) 6.6×10^{-34} (D) 6.8×10^{-34}

42. Highly excited states for hydrogen-like atoms (also called Rydberg states) with nuclear charge Ze are defined by their principal quantum number n , where $n \gg 1$. Which of the following statement(s) is (are) true? [JEE-Advanced-2016]

- (A) Relative change in the radii of two consecutive orbitals does not depend on Z
 (B) Relative change in the radii of two consecutive orbitals varies as $1/n$
 (C) Relative change in the energy of two consecutive orbitals varies as $1/n^3$
 (D) Relative change in the angular momenta of two consecutive orbitals varies as $1/n$

43. A hydrogen atom in its ground state is irradiated by light of wavelength 970 Å. Taking $hc/e = 1.237 \times 10^{-6} \text{ eV m}$ and the ground state energy of hydrogen atom as -13.6 eV , the number of lines present in the emission spectrum is [JEE-Advanced-2016]

MOCK TEST

SECTION - I: STRAIGHT OBJECTIVE TYPE

- In an α -decay the Kinetic energy of α particle is 48 MeV and Q-value of the reaction is 50 MeV. The mass number of the mother nucleus is:- (Assume that daughter nucleus is in ground state)

(A) 96 (B) 100 (C) 104 (D) none of these
- The angular momentum of an electron in first orbit of Li^{++} ion is :

(A) $\frac{3h}{2\pi}$ (B) $\frac{9h}{2\pi}$ (C) $\frac{h}{2\pi}$ (D) $\frac{h}{6\pi}$
- If first excitation potential of a hydrogen like atom is V electron volt, then the ionization energy of this atom will be:

(A) V electron volt (B) $\frac{3V}{4}$ electron volt

(C) $\frac{4V}{3}$ electron volt (D) cannot be calculated by given information.
- All electrons ejected from a surface by incident light of wavelength 200 nm can be stopped before travelling 1 m in the direction of uniform electric field of 4 N/C. The work function of the surface is:

(A) 4 eV (B) 6.2 eV (C) 2 eV (D) 2.2 eV
- An electron of mass 'm', when accelerated through a potential V has de-Broglie wavelength λ . The de-Broglie wavelength associated with a proton of mass M accelerated through the same potential difference will be:

(A) $\lambda \sqrt{\frac{M}{m}}$ (B) $\lambda \sqrt{\frac{m}{M}}$ (C) $\lambda \left(\frac{M}{m}\right)$ (D) $\lambda \left(\frac{m}{M}\right)$
- Two hydrogen atoms are in excited state with electrons residing in $n = 2$. First one is moving towards left and emits a photon of energy E_1 towards right. Second one is moving towards right with same speed and emits a photon of energy E_2 towards right. Taking recoil of nucleus into account during emission process

(A) $E_1 > E_2$ (B) $E_1 < E_2$ (C) $E_1 = E_2$ (D) information insufficient
- In a hydrogen atom following the Bohr's postulates the product of linear momentum and angular momentum is proportional to $(n)^x$ where 'n' is the orbit number. Then 'x' is :

(A) 0 (B) 2 (C) -2 (D) 1
- The voltage applied to an X-ray tube is 18 kV. The maximum mass of photon emitted by the X-ray tube will be:

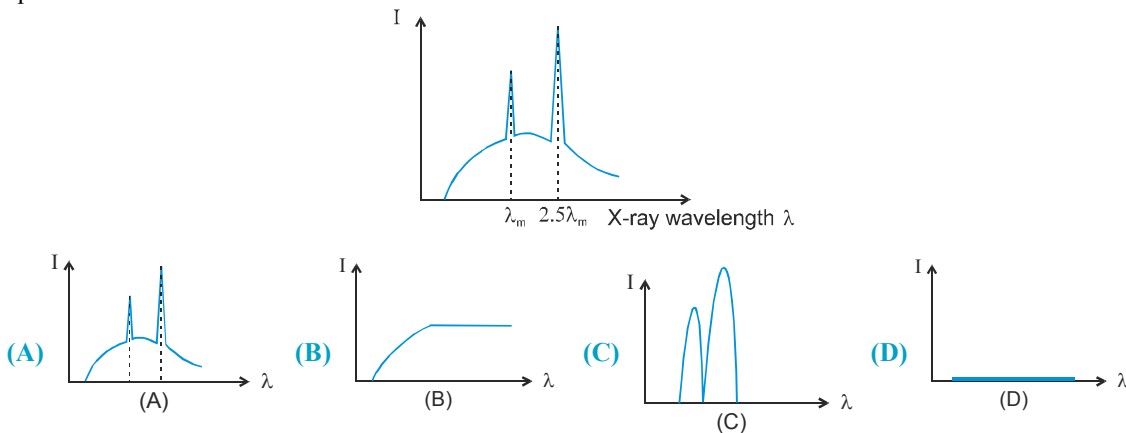
(A) 2×10^{-13} kg (B) 3.2×10^{-36} kg (C) 3.2×10^{-32} kg (D) 9.1×10^{-31} kg
- The wavelengths of K_α x-rays of two metals 'A' and 'B' are $\frac{4}{1875 R}$ and $\frac{1}{675 R}$ respectively, where 'R' is Rydberg's constant. The number of elements lying between 'A' and 'B' according to their atomic numbers is

(A) 3 (B) 6 (C) 5 (D) 4
- One of the lines in the emission spectrum of Li^{2+} has the same wavelength as that of the 2nd line of Balmer series in hydrogen spectrum. The electronic transition corresponding to this line is :

(A) $n = 4 \rightarrow n = 2$ (B) $n = 8 \rightarrow n = 2$ (C) $n = 8 \rightarrow n = 4$ (D) $n = 12 \rightarrow n = 6$

PHYSICS FOR JEE MAINS & ADVANCED

11. If the short wavelength limit of the continuous spectrum coming out of a coolidge tube is 10 \AA , then the debroglie wavelength of the electrons reaching the target metal in the coolidge tube is approximately :
 (A) 0.3 \AA (B) 3 \AA (C) 30 \AA (D) 10 \AA
12. The photon radiated from hydrogen corresponding to 2nd line of Lyman series is absorbed by a hydrogen like atom 'X' in 2nd excited state. As a result the hydrogen like atom 'X' makes a transition to nth orbit. Then,
 (A) $X = \text{He}^+, n = 4$ (B) $X = \text{Li}^{++}, n = 6$ (C) $X = \text{He}^+, n = 6$ (D) $X = \text{Li}^{++}, n = 9$
13. In a photoelectric experiment, with light of wavelength λ , the fastest electron has speed v . If the exciting wavelength is changed to $\frac{3\lambda}{4}$, the speed of the fastest emitted electron will become
 (A) $v\sqrt{\frac{3}{4}}$ (B) $v\sqrt{\frac{4}{3}}$ (C) less than $v\sqrt{\frac{3}{4}}$ (D) greater than $v\sqrt{\frac{4}{3}}$
14. 1.5 MW of 400 nm light is directed at a photoelectric cell. If 0.10% of the incident photons produce photoelectrons, the current in the cell is
 (A) $0.36 \mu\text{A}$ (B) $0.48 \mu\text{A}$ (C) 0.42 mA (D) 0.32 mA
15. The element which has a k_{α} x-rays line of wavelength 1.8 \AA is
 ($R = 1.1 \times 10^7 \text{ m}^{-1}$, $b = 1$ and $\sqrt{5/33} = 0.39$)
 (A) Co, $Z = 27$ (B) Iron, $Z = 26$ (C) Mn, $z = 25$ (D) Ni, $z = 28$
16. When an electron accelerated by potential difference U is bombarded on a specific metal, the emitted X-ray spectrum obtained is shown in adjoining graph. If the potential difference is reduced to $U/3$, the correct spectrum is



17. In the hydrogen atom, an electron makes a transition from $n = 2$ to $n = 1$. The magnetic field produced by the circulating electron at the nucleus
 (A) decreases 16 times (B) increases 4 times
 (C) decreases 4 times (D) increases 32 times
18. An electron in a hydrogen atom makes a transition from first excited state to ground state. The equivalent current due to circulating electron
 (A) increases 2 times (B) increases 4 times
 (C) increases 8 times (D) remains the same

SECTION - II : MULTIPLE CORRECT ANSWER TYPE

19. When a hydrogen atom is excited from ground state to first excited state then
 (A) its kinetic energy increases by 10.2 eV.
 (B) its kinetic energy decreases by 10.2 eV.
 (C) its potential energy increases by 20.4 eV.
 (D) its angular momentum increases by 1.05×10^{-34} J-s.
20. In an x-ray tube the voltage applied is 20KV. The energy required to remove an electron from L shell is 19.9 KeV. In the x-rays emitted by the tube
 (A) minimum wavelength will be 62.1 pm
 (B) energy of the characteristic x-rays will be equal to or less than 19.9 KeV
 (C) L_{α} x-ray may be emitted
 (D) L_{α} x-ray will have energy 19.9 KeV
21. Suppose the potential energy between electron and proton at a distance r is given by $-\frac{Ke^2}{3r^3}$. Application of Bohr's theory to hydrogen atom in this case shows that
 (A) energy in the nth orbit is proportional to n^6
 (B) energy is proportional to m^{-3} (m : mass of electron)
 (C) energy of the nth orbit is proportional to n^{-2}
 (D) energy is proportional to m^3 (m = mass of electron)
22. Let A_n be the area enclosed by the nth orbit in a hydrogen atom. The graph of $\ln(A_n/A_1)$ against $\ln(n)$
 (A) will pass through origin
 (B) will be a straight line with slope 4
 (C) will be a monotonically increasing nonlinear curve
 (D) will be a circle

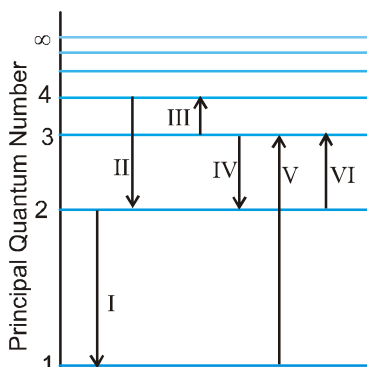
SECTION - III : ASSERTION AND REASON TYPE

23. **Statement-1 :** Though light of a single frequency (monochromatic light) is incident on a metal, the energies of emitted photoelectrons are different.
Statement-2 : The energy of electrons just after they absorb photons incident on metal surface may be lost in collision with other atoms in the metal before the electron is ejected out of the metal.
 (A) Statement-1 is True, Statement-2 is True; Statement-2 is a correct explanation for Statement-1
 (B) Statement-1 is True, Statement-2 is True; Statement-2 is NOT a correct explanation for Statement-1
 (C) Statement-1 is True, Statement-2 is False
 (D) Statement-1 is False, Statement-2 is True.
24. **Statement-1 :** The de-Broglie wavelength of a molecule (in a sample of ideal gas) varies inversely as the square root of absolute temperature.
Statement-2 : The rms velocity of a molecule (in a sample of ideal gas) depends on temperature.
 (A) Statement-1 is True, Statement-2 is True; Statement-2 is a correct explanation for Statement-1
 (B) Statement-1 is True, Statement-2 is True; Statement-2 is NOT a correct explanation for Statement-1
 (C) Statement-1 is True, Statement-2 is False
 (D) Statement-1 is False, Statement-2 is True.
25. **Statement-1 :** Heavy nuclides tend to have more number of neutrons than protons.
Statement-2 : As there is coulombic repulsion between protons, so in heavy nuclei, excess of neutrons are preferable.
 (A) Statement-1 is True, Statement-2 is True; Statement-2 is a correct explanation for Statement-1
 (B) Statement-1 is True, Statement-2 is True; Statement-2 is NOT a correct explanation for Statement-1
 (C) Statement-1 is True, Statement-2 is False
 (D) Statement-1 is False, Statement-2 is True.

SECTION - IV : COMPREHENSION TYPE

Comprehension # 2

Pertain to the statement and diagram below :

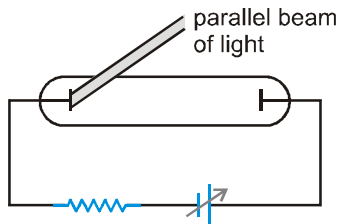


The figure given shows an energy level diagram for the hydrogen atom. Several transitions are marked as I, II, III, _____. The diagram is only indicative and not to scale.

- 26. In which transition is a Balmer series photon absorbed ?
 (A) II (B) III (C) IV (D) VI
- 27. The wavelength of the radiation involved in transition II is
 (A) 291 nm (B) 364 nm (C) 487 nm (D) 652 nm
- 28. Which transition will occur when a hydrogen atom is irradiated with radiation of wavelength 103nm?
 (A) I (B) II (C) IV (D) V

SECTION - V : MATRIX - MATCH TYPE

- 29. In the shown experimental setup to study photoelectric effect, two conducting electrodes are enclosed in an evacuated glass-tube as shown. A parallel beam of monochromatic light, falls on photosensitive electrodes. The emf of battery shown is high enough such that all photoelectrons ejected from left electrode will reach the right electrode. Under initial conditions photoelectrons are emitted. As changes are made in each situation of column I; Match the statements in column I with results in column II.



Column I

Column II

- | | |
|---|---|
| (A) If frequency of incident light is increased keeping number of photons per second constant

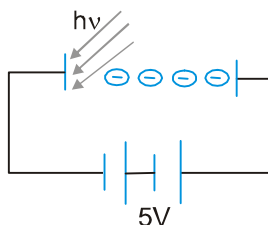
(B) If frequency of incident light is increased and number of photons per second is decreased. | (P) magnitude of stopping potential will increase

(Q) current through circuit may stop |
|---|---|

- (C) If work function of photo sensitive electrode is increased
 (D) If number of photons per second of incident light is increased keeping its frequency constant
- (R) maximum kinetic energy of ejected photoelectrons will increase
 (S) saturation current will increase
 (T) saturation current will decrease

SECTION - VI : INTEGER TYPE

30. Photons of energy 5 eV are incident on cathode as shown in the figure. Electrons reaching the anode have kinetic energies varying from 6eV to 8eV. Find the work function of the metal in ev. & state whether the current in the circuit is less than or equal to saturation current.



31. A sample of hydrogen atom gas contains 100 atoms. All the atoms are excited to the same n^{th} excited state. The total energy released by all the atoms is $\frac{4800}{49} R_{\text{ch}}$ (where $R_{\text{ch}} = 13.6 \text{ eV}$), as they come to the ground state through various types of transitions. Find
- (i) maximum energy of the emitted photon is $x/49 R_{\text{ch}}$. then x is
 - (ii) n
 - (iii) maximum total number of photons that can be emitted by this sample.

ANSWER KEY

EXERCISE - 1

1. C 2. B 3. A 4. B 5. A 6. D 7. B 8. B 9. B 10. A 11. D 12. C 13. D
 14. C 15. B 16. B 17. C 18. B 19. C 20. D 21. A 22. C 23. D 24. A 25. B 26. C
 27. A 28. A 29. B 30. C 31. A 32. A 33. D 34. D 35. B 36. A 37. A 38. D 39. D
 40. B 41. C 42. D 43. D 44. C 45. B 46. B 47. D 48. B 49. D 50. D 51. D 52. B
 53. A 54. D 55. C 56. C 57. D 58. A 59. D 60. C 61. D 62. D

EXERCISE - 2 : PART # I

1. A,B 2. C,D 3. C,D 4. A,B,C,D 5. A,D 6. A,B,C 7. A,B,C 8. A,B,C

PART # II

1. D 2. A 3. D 4. D

EXERCISE - 3 : PART # I

1. A → R; B → Q,S; C → P; D → Q,S 2. A → R; B → S; C → P; D → Q 3. A → P,R; B → Q,S; C → Q,S D → P,R

PART # II

- Comp.#1 1. D 2. C 3. D Comp.#2 1. B 2. A 3. C

EXERCISE - 4

1. $(0.6 \times 10^{15} \text{ h} - 2e) \text{ J} = 0.48 \text{ eV}$ 2. $\frac{P^2}{2m} = \left(\frac{1.24 \times 10^4}{4000} - 2.5 \right) \text{ eV} = 0.6 \text{ eV};$

$P = \sqrt{2 \times 9.1 \times 10^{-31} \times 0.6 \times 1.6 \times 10^{-19}} = 4.2 \times 10^{-25} \text{ kg.m/s}$ 3. $I = \eta \cdot \frac{P}{E_\lambda} \times \frac{e}{100} = 1.84 \times 10^{-6} \text{ amp}$

4. $\left(\frac{9 \times 10^{15}}{2\pi e} \text{ h} - 2 \right) \text{ eV} = 3.93 \text{ eV}$ 5. $dV_s = \frac{hc}{e} \cdot \frac{d\lambda}{\lambda^2} = -\frac{hc}{228e} \times 10^7 = -5.5 \times 10^{-2} \text{ volt}$ 6. $\frac{354 \times 10^{-8}}{hc} = 1.77 \times 10^{19}$

7. $\frac{1.3 \times 30}{3 \times 10^8} = 1.3 \times 10^{-7}$ 8. $5 \times 10^{-8} \text{ N}$ 9. $\lambda_d = \sqrt{\frac{h\lambda\lambda_{th}}{2m.c(\lambda_{th} - \lambda)}} = \sqrt{\frac{6 \times 10^{-7} \text{ h}}{m_e c}} \text{ m} = 12.08 \text{ \AA}$

10. (a) $r = 0.529 \times \frac{2^2}{2} = 1.058 \text{ \AA} \Rightarrow E = -13.6 \times \frac{2^2}{2^2} = -13.6 \text{ eV}$ (b) $r = 0.529 \times \frac{3^2}{2} = 2.38 \text{ \AA} \Rightarrow E = -13.6 \times \frac{2^2}{3^2} = -6.04 \text{ eV}$.

11. $\lambda = \frac{2\lambda_1 \lambda_2}{\sqrt{\lambda_1^2 + \lambda_2^2}}$ 12. $\lambda = 2\pi r = 2\pi \times 0.529 \text{ \AA} = 1.058 \pi \text{ \AA}$ 13. $T = \frac{2E_0}{3K} \text{ K} = 1.05 \times 10^5 \text{ K}$ 14. He^{+1}

15. (a) 91 nm (b) 23 nm 16. $\nu = \frac{6}{h} \left[13.6e - \frac{hc \times 10^{10}}{1215} \right] = 5 \times 10^{15} \text{ Hz}$,

17. $\frac{v_0}{r_0} \cdot \frac{z^2}{n^3} = \frac{2.19 \times 10^6}{0.529 \times 10^{-10}} \times \frac{Z^2}{n^3} = 2.07 \times 10^{16} \text{ s}^{-1}$ 18. He⁺ 4 19. n = 5 20. $\frac{(E - E')}{E} \times 100 = 0.55 \times 10^{-6} \%$

21. $\frac{E}{c} \cdot \frac{1}{m} = \frac{13.6 \times 3e}{4cm_p} = 3.25 \text{ m/s}$ 22. $T_{\min} = \frac{T}{2} = 10.2 = 20.4 \text{ eV}$ 23. (a) $\frac{hc}{13.6 \times 8e} = 113.7 \text{ \AA}$ (b) 3

24. approximately 0.1% 25. $\lambda = \frac{hc}{40 \times 10^3 e} \text{ m} = 31.05 \text{ pm}$ 26. $v_1 = \frac{hc}{1.5e(\lambda_1 + 26 \times 10^{-12})} \text{ V} = 15.9 \text{ kV}$

27. $\lambda_1 = \left(\frac{26-1}{29-1}\right)^2 193 \text{ pm} = 154 \text{ pm}$ 28. $\lambda_1 = \frac{hc}{20 \times 10^3 \times (0.7)e} = 88.6 \text{ pm}$, $\lambda_2 = \frac{hc}{20 \times 10^3 \times (0.7 \times 0.3)e} = 295.6 \text{ pm}$,

$\lambda_3 = \frac{hc}{20 \times 10^3 \times 0.7 \times (0.3)^2 e} = 985.6 \text{ pm}$, 29. $\frac{P\lambda}{hc \times 10^6} \text{ e A} = 3.2 \text{ \AA}$ 30. $\phi = \sin^{-1}(0.2231) \approx 12.89^\circ$

31. $W = \left(\frac{hc}{200 \times 10^{-9} e} - \frac{hc}{100 \times 10^{-9} e} + 10\right) \text{ eV} = 3.8 \text{ eV}$ 32. $B_{\min} = \frac{20}{e} \sqrt{2m_e \left(\frac{hc}{4 \times 10^{-7}} - 2.39 e\right)} = 5.70 \times 10^{-5} \text{ T}$

33. (a) $\frac{hc \times 10^7}{4e} \times (0.9)^2 - 2.2 = 0.31 \text{ eV}$ (b) 4 34. KE $\cong 151 \text{ eV}$, $d_{\text{least}} = 0.5 \text{ \AA}$ 35. (a) $N = \frac{7 \times 10^{-4}}{hc} = 3.5 \times 10^{21}$,

(b) $\frac{7 \times 10^{-4}}{hc^2} = 1.2 \times 10^{13}$, (c) $\frac{7 \times 10^{-4} \times 4\pi(1.5 \times 10^{11})^2}{hc} = 9.9 \times 10^{44}$ 36. $10^{-7} e \frac{2.19 \times 10^6}{(0.529 \times 10^{-10})^2} = 12.5 \text{ T}$

37. (a) $\sqrt{\frac{h}{2\pi eB}}$ (b) $\sqrt{\frac{nh}{2\pi eB}}$ (c) $\sqrt{\frac{heB}{2\pi m^2}}$

38. x = 0 39. $\frac{1}{2} ke \left(1 + 2 \ln \left(\frac{nh}{2\pi \sqrt{kema^2}}\right)\right)$ 40. (i) $N = \frac{4hc}{3 \times 4 \times 2.2 \times 10^{-18}} = 300 \text{ \AA}$ (ii) $r = \frac{5 \times 10^{-11}}{\sqrt{4}} = 2.5 \times 10^{-11} \text{ m}$

41. $v_0 = \frac{hc}{\lambda e} - 2 = 0.55 \text{ volts}$ 42. (i) $\frac{48}{49} Rch$, (ii) n = 6, (iii) 600 43. (a) 2000 \AA, 1500 \AA,

(b) Assume energy of level 1 to be zero

-----E₄ = 7.75 eV
 -----E₃ = 7.35 eV
 -----E₂ = 6.2 eV
 -----E₁ = 0 eV

(c) 8.27 volt 44. $v = \sqrt{\frac{10.2e}{1.67 \times 10^{-27}}} = 3.13 \times 10^4 \text{ m/s}$ 45. (i) $r_0 = \frac{2h^2}{\pi^2 m} \times \frac{4\pi\epsilon_0}{e^2} = 4.23 \text{ \AA}$ (ii) $\frac{1}{2} m \left(\frac{e^2 \pi}{4\pi\epsilon_0 h}\right)^2 \text{ J} = 3.4 \text{ eV}$

46. (i) $\lambda_{\min} = \frac{hc}{e \times 20 \times 10^3} \text{ m} = 0.62 \text{ \AA}$ (ii) No (iii) Yes, $\lambda = \frac{124}{155} \text{ \AA} = \frac{4}{5} \text{ \AA} = 0.8 \text{ \AA}$

47. (a) He⁺, (b) $K_{\min} = \frac{5}{4} \Delta E = \frac{5}{4} \times 51 \text{ eV} = 63.75 \text{ eV}$ 48. $K_{\text{recoil}} = \left(\frac{6.4 \times 10^3 e}{c}\right)^2 \times \frac{1}{2 \times (9.3 \times 10^{26})} \text{ J} = 3.9 \times 10^{-4} \text{ eV}$

PHYSICS FOR JEE MAINS & ADVANCED

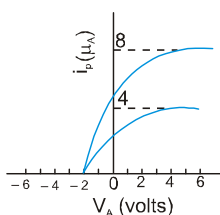
49. (i) k_α (ii) 102 keV. 50. $n = 6, Z = 3$ 51. $\left[\frac{hc}{0.36 \times 10^{-9} e} + 16 \right] eV = 3.47 \text{ KeV}$

52. (a) 10^5 s^{-1} (b) 286.18 (d) $\frac{1000}{9} \text{ sec} = 111 \text{ s}$

EXERCISE - 5 : PART # I

1. 1 2. 3 3. 1 4. 2 5. 1 6. 2 7. 2 8. 4 9. 3 10. 4 11. 1 12. 1 13. 3
 14. 3 15. 3 16. 2 17. 3 18. 4 19. 3 20. 1 21. 3 22. 1 23. 4 24. 2 25. 3 26. 4
 27. 3 28. 4 29. 4 30. 4 31. 4 32. 1 33. 4 34. 4 35. 3 36. 2 37. 4

PART # II



1. B 2. B 3. 4. 42 5. A 6. B 7. $K_{\max} = hv - \phi = 0.55 \text{ eV}$ 8. C

9. A 10. $\sqrt{2}$ 11. A, C 12. $n = 24$ 13. B 14. B 15. A 16. B 17. C 18. C 19. A 20. A 21. B
 22. D 23. A 24. 3 25. D 26. B 27. C 28. A 29. C 30. B 31. 7 32. B 33. 1 34. A, C
 35. B 36. A 37. 0002 38. A, C 39. 2 40. D 41. B 42. A, B, D 43. 6

MOCK TEST

1. B 2. C 3. C 4. D 5. B 6. B 7. A 8. C 9. D 10. D 11. A 12. D 13. D
 14. B 15. A 16. B 17. D 18. C 19. B, C, D 20. A, B, C 21. A, B 22. A, B 23. A 24. B
 25. A 26. D 27. C 28. D 29. A 30. 2

31. (i) $\frac{48}{49} R_{ch}$, (ii) $n = 6$, (iii) 600